

SRI KRISHNAVENI BANKING COACHING CENTRE

YEMMIGANUR, CELL: 9885303408. www.krishnaveni632.yolasite.com

MAXMARKS:200

MODEL PAPER-9

TIME:135 MINI

GENERAL AWARENESS

- 1) The world Health Organization (WHO) in a study of 1600 cities ranked which city as the world's worst city for air pollution?
1) New Delhi 2) Mumbai 3) Kolkata 4) London
5) New York
- 2) Alenka Bratusek resigned as the prime Minister of which of the following countries on May 5, 2014? (She was the first woman prime Minister of this European country)
1) Serbia 2) Slovenia 3) Slovakia
4) San Marino 5) Montenegro
- 3) Who won the world snooker Championship title at the Crucible, Sheffield, England in May 2014?
1) John Higgins 2) Ronnie O' Sullivan
3) Mark Selby 4) Shaun Murphy
5) Alan Me manuss
- 4) Who assumed office as the president of Costa Rica on May 8, 2014? (He succeeded Laura Chinchilla)
1) Helio Fallas venegas 2) Johnny Araya Monge
3) Alfio Piva 4) Luis Guillermo solis
5) Oscar Arias
- 5) India's first indigenous refinery-cum - petrochemicals complex will come up at pachpadra in Barmer district of ?
1) Uttar Pradesh 2) Gujarat 3) Himachal Pradesh
4) Haryana 5) Rajasthan
- 6) The first Sree Narayana Guru Global Secular and peace Award 2013 has been conferred on?
1) Oommen Chandy 2) Sachin Pilot
3) Shashi Tharoor 4) V.Narayanasamy
5) Sheila Dixit
- 7) The commodity forward trading regulator Forward Markets commission (FMC) is now under the administrative control of the Finance Ministry Previously FMC was regulated by the Ministry of ?
1) Rural Development 2) Commerce and Industry
3) Corporate Affairs 4) Consumer Affairs
5) Micro, small and Medium Enterprises
- 8) Which state has been selected for the 2013 National Literacy Award ?
1) Jharkhand 2) Uttarakhand 3) Chhattisgarh
4) Bihar 5) Rajasthan
- 9) The Reserve Bank of India constituted a committee on customer service in bank. The committee was headed by ?
1) M.Damodaran 2) M.Rajyalakshmi Rao
3) Ashok Rawat 4) M.V. Nair
5) M.Sundara Rajan
- 10) The Department of Telecommunication (DOT) Has formed a committee to examine the recommendation made by the Telecom Regulatory Authority of India on pricing of spectrum. The Committee is chaired by ?
1) Anil kaushal 2) Sam pitroda
3) Rahul Khullar 4) C.Rangarajan
5) None of these
- 11) Which two countries held talks for the first time in three decades in September 2013?
1) USA-North Korea 2) USA-Cuba
3) North Korea-South Korea 4) USA-Iran
5) India-Myanmar
- 12) Which country awarded the 2013 whistleblower prize to Edward Snowden ?
1) Russia 2) Germany 3) Ecuador
4) UK 5) France
- 13) The Finance Ministry oversees operations of several regulators. Which of the following is not one of them?
1) SEBI 2) IRDA 3) PFRDA 4) FMC 5) TRAI
- 14) The United Nations Organization designated which of the following days as the International day of Charity ? (It is the death anniversary of Mother Teresa)
1) September 15 2) September 16
3) September 3 4) September 9
5) September 5
- 15) A nuclear power plant will be built by the Nuclear power Corporation of India Limited (NPCIL) AT Mithi viridi village in ?
1) Rajasthan 2) Gujarat 3) Uttar pradesh
4) Bihar 5) Odisha
- 16) Which country has developed the world's first Zinc-enriched rice variety capable of fighting diarrhea and pneumonia-induced childhood deaths And stunt growth ?
1) India 2) Philippines 3) Bangladesh
4) China 5) Pakistan
- 17) WZ-10 is an attack helicopter recently launched by ?
1) Israel 2) Pakistan 3) India
4) China 5) Japan
- 18) The inaugural Mahathir Award for Global peace was given to Nelson Mandela in 2013. Which country gives this award?

- 1) Indonesia 2) Brunei 3) Turkey
4) Afghanistan 5) Malaysia
- 19) Which city hosted the Shanghai Cooperation Organization (SCO) summit in September 2013?
1) Moscow, Russia 2) Yekaterinburg, Russia
3) Beijing, China 4) Bishkek, Kyrgyzstan
5) Shanghai, China
- 20) Which one of the following countries is not an Observer in the Shanghai Cooperation Organization?
1) Afghanistan 2) India 3) Iran
4) Mongolia 5) Japan
- 21) Sebastiaan Bowier has broken the bicycle world speed record recently. He belongs to?
1) Germany 2) Netherlands 3) UK
4) Spain 5) France
- 22) Which Indian company has signed a memorandum of understanding (MOU) with Singapore Airlines to launch a joint-venture airline?
1) Aditya Birla Group 2) Yash Birla Group
3) Tata Sons 4) Reliance 5) Bajaj
- 23) The Imperial Bank of India came into existence on January 27, 1921 on the advice of?
1) Winston Churchill 2) Lord Illingworth
3) J.M. Keynes 4) Lord Curzon
5) King George V
- 24) In India, the commercial banks are given license of operation by the?
1) Ministry of Finance 2) Finance Commission
3) Government of India 4) Planning Commission
5) None of these
- 25) Which one of the following is not an international organization?
1) SAARC 2) ASEM 3) ASEAN
4) CDBT 5) SCO
- 26) The Indian Diamond Institute is located in?
1) New Delhi 2) Surat 3) Mumbai
4) Jaipur 5) Nagpur
- 27) Martyrs' day is observed on?
1) January 9 2) January 15 3) January 30
4) January 24 5) January 25
- 28) The state of food Insecurity in the world report is published every year by?
1) The Food and Agriculture Organization
2) The International Fund for Agriculture Development
3) The World Food Program
4) Both 1 and 2 5) All 1, 2 and 3
- 29) According to the new state of food Insecurity in the world 2013 report, how many million people suffered from chronic hunger during 2011-13?
1) 842 million 2) 620 million 3) 773 million

- 4) 752 million 5) 653 million
- 30) China has launched its first Foreign Trade Zone (FTZ) in?
1) Beijing 2) Shanghai 3) Canton
4) Shenzhen 5) Guangzhou
- 31) Indian Grassland and Fodder Research Institute is located in?
1) Ranchi 2) Jhansi 3) Patna
4) Karnal 5) Gurgaon
- 32) The Employment Guarantee scheme (EGS) was first introduced in?
1) Madhya Pradesh 2) Andhra Pradesh
3) Uttar Pradesh 4) Rajasthan
5) Maharashtra
- 33) Which of the following is/are source/s of agricultural credit in India?
1) RRBs 2) Moneylenders
3) Commercial banks 4) Both 1 and 3
5) All 1, 2 and 3
- 34) Which of the following is known as the 'city of Canals'?
1) Amsterdam 2) Rome 3) Venice
4) Athens 5) Paris
- 35) Africa is separated from Europe by?
1) Red sea 2) Mediterranean sea
3) Atlantic Ocean 4) Persian Gulf
5) None of these
- 36) The president's rule under article 356 of the Constitution of India remains valid in the state for a maximum period of?
1) One month 2) Three months 3) Six months
4) One year 5) Two years
- 37) Which one of the following pairs is correctly matched?
- | COUNTRY | CAPITAL |
|----------------|----------|
| 1) Venezuela | Bogota |
| 2) New Zealand | Auckland |
| 3) Colombia | Caracas |
| 4) Cyprus | Nicosia |
| 5) Chile | Quito |
- 38) Dampa Tiger Reserve is the largest wildlife sanctuary in?
1) Mizoram 2) Assam 3) Nagaland
4) Rajasthan 5) Tripura
- 39) Which country won the 2013 SAFF Football Championship in Kathmandu, Nepal?
1) Afghanistan 2) India 3) Sri Lanka
4) Nepal 5) Pakistan
- 40) Which one of the following books is written by Ramachandra Guha?
1) Indian and Malaysia Intertwined strand
2) The King's deception 3) Narcopolis
4) The Lowland 5) Gandhi Before India

GENERAL ENGLISH

Directions (Qs. 41 to 45): Read the following passage carefully and answer the questions given below it. Certain words are printed in **bold** to help you to locate them while answering some of the questions.

The window **offered** a view of the house opposite. The two families did not speak to each other because of a property dispute. One day, Ruchira's textbooks lay untouched as the young girl's gaze was on the happenings in the house opposite. There were two new faces in the neighbouring household those of an elderly widow and a girl, aged sixteen. Sometimes the elderly lady would sit by the window, doing combing young girl's hair. On other days she was absent.

The new young neighbour's daily routine could be seen through the window—she cleaned the rice paddy; split nuts, put the cushions in the sun to air them. In the afternoons while the men were all at work some of the women slept and others played cards. The girl sat on the terrace and read. Sometimes she wrote. One day there was a **hindrance**. She was writing when the elderly woman snatched the unfinished letter from her hands. Thereafter the girl was not to be seen on the terrace. Sometimes during the days sounds came from the house indicating that a massive argument was going on inside.

A few days passed. One evening Ruchira noticed the girl standing on the terrace in tears. The evening prayer was in progress. As she did daily, the girl bowed several times in prayer. Then she went downstairs. That night Ruchira wrote a letter. She went out and posted it that very instant. But as she lay on bed that night, she prayed fervently that her offer of friendship wouldn't reach its destination. Ruchira then left for Madhupur and returned when it was time for college to start. She found the house opposite in darkness, locked. They had left.

When she stepped into her room she found the desk **piled** with letter—one had a local stamp on it with her name and address in unfamiliar handwriting. She quickly read it. They continued to write each other for the next twenty years.

41. Why did Ruchir write a letter to her new neighbour?

1. She wanted to offer her, her help.
2. She wanted to be friends with her.
3. To apologise for her family's behaviour towards her family.
4. To encourage her to continue learning to read and write.
5. None of these.

42. Which of the following can be said about Ruchira?

- A. She used to spy on her neighbours because she didn't trust them.
- B. She was at home because she was studying.
- C. She did not speak to her neighbours because they did not own property.

1. None
2. Only B
3. Both A & B
4. Only C
5. Both A & C

43. How did the new young neighbour spend her days?

1. She was busy writing letters to Ruchira.

2. She used to daydream about her past experiences.
3. She would attend to the needs of the widow.
4. She spent her time learning to read and write.
5. None of these

44. Why was the young neighbour prevented from sitting on the terrace?

1. She used to while away her time instead of working.
2. The old woman could no longer keep an eye on her.
3. She had not finished writing the letter she was asked to.
4. She had been writing a letter which she wasn't supposed to.
5. As a punishment for being disrespectful and arguing with her elders.

45. What was the major arguing in the house about?

1. There were too many people living there, which resulted in arguments.
2. The young girl was insisting on attending college.
3. The young girl had been wasting her time instead of working.
4. The old woman did not guard the young girl closely.
5. None of these.

46. Which of the following is true in the context of the passage?

1. The young girl was very devout and prayed everyday.
2. Only two letters were exchanged between the two girls.
3. The new young neighbour was a servant.
4. The afternoon was a time to relax for everyone.
5. The two families had fought because of the letters the two girls wrote to each other.

47. Why did the young girl wish that the letter would not reach its destination?

- A. She was going away and would not be able to see if her neighbour was glad to receive it.
- B. She was afraid that it would lead to a quarrel between the two families.
- C. She was afraid that her neighbour would be angry when she received her letter.

1. None
2. Only A
3. Only C
4. Both B & C
5. Only B

Directions (Qs. 48 & 49): Choose the word which is most nearly the same in meaning as the word printed in bold as used in the passage.

48. hindrance :

1. handicapped
2. delay
3. interruption
4. difficult
5. bar

49. offered :

1. forward
2. willing
3. volunteered
4. provided
5. put

50. Choose the word which in most opposite in meaning of the word piled as used in the passage,

1. low
2. empty
3. blank
4. nothing
5. fell

Directions (Qs. 51 to 55) : Read each sentence to find out whether there is any error in it. The error, if any,

will be in one part of the sentence. The number of that part is the answer. If there is no error, the answer is (5). (Ignore errors of punctuation, if any.)

51. The price of (1) / all petroleum products (2) / is controlled (3) / by the Government (4) / No error (5)
52. There is a (1) / tax benefit for (2) / the income of (3) / senior citizens. (4) / No error (5)
53. In my opinion (1) / Vikas has (2) / failed to follow (3) / none of the instructions (4) / No error (5)
54. At least of (1) / three percent of (2) / those who applied (3) / will be selected. (4) / No error (5)
55. He was a (1) / well known economist (2) / who usual wrote (3) / for international journals. (4) / No error (5)

Directions (Qs. 56 to 60): Which of the phrases (1), (2), (3) and (4) given below should replace the phrase given in bold in the following sentence to make the sentence grammatically meaningful and correct. If the sentence is correct as it is and no correction is required, mark (5) as the answer.

56. **Occupying** by many meetings, he did not reach home till late.
1. By occupying 2. While occupied
3. Occupation of 4. Occupied with
5. No correction required
57. **We were nervous while the auditor was going by the accounts.**
1. had gone through 2. was going over
3. gone through 4. went by
5. No correction required
58. **Parents have to take some of this precaution while allowing their children to use the Internet.**
1. each of these precaution 2. every precautions
3. all these precautions 4. any of this precaution
5. No correction required
59. **An employee will get the incentive, only if he deserves it.**
1. he himself deserves 2. they deserving it
3. be deserved for it 4. he was deserving
5. No correction required
60. **Sunita has been posted in Chennai, where is her birthplace.**
1. which is her 2. that is her
3. that she has 4. there is her
5. No correction required

Directions (Qs. 61 to 65): Rearrange the following sentence (A), (B), (C), (E) and (F) in the proper sequence to form a meaningful paragraph; then answer the questions given below them.

- A. The old lady however refused to pay him and was taken to court
- B. The doctor, confident of the valuable furniture had been removed from her house.
- C. Finally he cured her after all the valuable furniture had been removed from her house.
- D. He then saw her furniture, realised its value and decided to delay curing her till he could steal it.
- E. A blind old lady promised to pay the doctor a large sum of money if she was cured had nothing if she wasn't.

F. She was asked why she refused to pay by the judge. "I am not cured. I cannot see all my furniture!" was the reply.

61. Which of the following should be the **SIXTH (LAST)** sentence after rearrangement?
1. B 2. C 3. D 4. E
5. F
62. Which of the following should be the **THIRD** sentence after rearrangement?
1. B 2. C 3. D 4. E
5. F
63. Which of the following should be the **FIFTH** sentence after rearrangement?
1. A 2. B 3. C 4. D
5. E
64. Which of the following should be the **SECOND** sentence after rearrangement?
1. A 2. B 3. C 4. D
5. E
65. Which of the following should be the **FIRST** sentence after rearrangement?
1. B 2. C 3. D 4. E
5. F

Directions (Q. 66-70): In each of these question below a sentence with four words printed in bold type is given. These are numbered as 1, 2, 3 and 4. One of these four words printed in bold may be either wrongly spelt or inappropriate in the context of the sentence. Find out the word, which is wrongly spelt or inappropriate, if any. The number of words printed in bold are correctly spelt and also appropriate in the context of the sentence, mark 5 i.e. "All Correct" as your answer.

66. There were many **objectives** 1/ from employees to the **proposal** 2/ to amend 3/ the **regulations**. 4/ All correct 5.
67. Since he has **provided** 1/ over **halve** 2/ the finance for the **infrastructure** 3/ he should be in **charge**. 4/ All correct 5.
68. The scheme **permits** 1/ **investors** 2/ to buy the shares from **foreign** 3/ companies at a **ficsed** 4/ price. All correct 5.
69. A leader who **relies** 1/ on his team **members** 2/ for **advice** 3/ is **respected**. 4/ All correct 5.
70. He is in **complete** 1/ **agreement** 2/ with your **analyse** 3/ of the **situation** 4/ All correct 5.

Directions (Q. 71-80): In the following passage, there are blanks each of which has been numbered. These numbers are printed below the passage and against each, five words are suggested one of which fits the blank appropriately. Find out the appropriate word in each case.

Most of the employees had no — 71 — in the oil industry. Employees were paid a — 72 — salary but they were loyal and hard working. They often worked without breaks — they once worked — 73 — for 72 hours to discharge oil from a Russian tanker — 74 — made the difference was the support they — 75 — from their bosses. On — 76 — occasions barrier between boss and subordinate vanished. We all worked like a team and — 77 — unexpected results. The air force — 78 — presented a letter of — 79 — to the company for the work done by us. Thus these determined — 80 — poorly paid

employees have built the company into what it is today.

71. 1. practise 2. contact
3. discipline 4. experience
5. knowledge
72. 1. minor 2. low
3. less 4. cheaper
5. little
73. 1. continuously 2. fully
3. running 4. near
5. slowly
74. 1. Which 2. They
3. What 4. There
5. That
75. 1. showed 2. taken
3. wanted 4. needed
5. received
76. 1. any 2. many
3. couple 4. regularly
5. this
77. 1. achieve 2. seen
3. given 4. contribute
5. produced
78. 1. was 2. yet
3. even 4. instead
5. still
79. 1. compliment 2. thank
3. regret 4. appreciation
5. reward
80. 1. though 2. not
3. enough 4. beside
5. despite

QUANTITATIVE APTITUDE

Directions (Q. 81-100): What should come in place of the question mark (?) in the following questions?

81. $58\% \text{ of } 842 + ? = 1200$
1. 874.54 2. 711.64 3. 674.74 4. 543.84
5. None of these
82. $(59)^2 + (12)^2 = (?)^2 + 600$
1. 53 2. 45 3. 55 4. 48
5. None of these
83. $2\frac{1}{5} + 3\frac{2}{5} - 1\frac{1}{3} = ?$
1. $4\frac{4}{15}$ 2. $4\frac{1}{4}$ 3. $4\frac{2}{3}$ 4. $4\frac{1}{5}$
5. None of these
84. $1221 + 1117 = ?\% \text{ of } 6680$
1. 31 2. 24 3. 35 4. 18
5. None of these
85. $52\% \text{ of } (?) = 3387.28$
1. 6400 2. 6342 3. 6718 4. 6539
5. None of these
86. $\sqrt{?} = ?$
1. 111 2. 121 3. 81 4. 91
5. None of these
87. $72\% \text{ of } 654 - 41\% \text{ of } 312 = ?$

1. 276.60 2. 296.72 3. 336.84 4. 342.96
5. None of these
88. $2376 \div 32 = ?$
1. 74.25 2. 67 3. 64.5 4. 69
5. None of these
89. $67539 + 43908 = ? + 78902$
1. 30125 2. 31265 3. 32455 4. 33555
5. None of these
90. $? \div 45 \times 9 = 315$
1. 1500 2. 1550 3. 1525 4. 1575
5. None of these
91. $12.6 \times 10.2 \times 6.5 = ?$
1. 555.68 2. 675.58 3. 755.48 4. 835.38
5. None of these
92. $28677 \div \sqrt{?} = 79 \times 11$
1. 33 2. 1225 3. 1089 4. 4.35
5. None of these
93. $12540 \div 55 \div 6 = ?$
1. 32 2. 38 3. 46 4. 44
5. None of these
94. $456 + 144 + 6 \times 8 = ?$
1. 12.5 2. 608 3. 648 4. 800
5. None of these
95. $\frac{16 \times 12 + 38}{12 \times 8 - 25} = ?$
1. $2\frac{1}{2}$ 2. $2\frac{11}{70}$ 3. $4\frac{35}{142}$ 4. $3\frac{7}{31}$
5. None of these
96. $45\% \text{ of } 300 + \sqrt{?} = 56\% \text{ of } 750 - 10\% \text{ of } 250$
1. 130 2. 60 3. 260 4. 67600
5. None of these
97. $895 + 440 + 55 = ?$
1. 456 2. 903 3. 760 4. 45
5. None of these
98. $12 \times 8 + (?)^2 = (14)^2$
1. 10 2. 1000 3. 100 4. 8
5. None of these
99. $48\% \text{ of } 840 = 36\% \text{ of } ?$
1. 1080 2. 1320 3. 1240 4. 720
5. None of these
100. $7\frac{1}{6} \text{ of } 186 + 565 = 2100 - ?$
1. 222 2. 202 3. 182 4. 172
5. None of these
101. If the product of two successive positive integers is 6162, which is the smaller integer?
1. 78 2. 72 3. 76 4. 74
5. None of these
102. The simple interest accrued on an amount of Rs. 10,530 at the end of 5 years is Rs. 6,318. What is the rate of interest p.c.p.a?
1. 8 2. 14 3. 10 4. 12
5. None of these
103. What should come in place of the question mark (?) in the following number series?
2, 5, 11, 23, 47, 95, ?

1. 168 2. 154
3. 191 4. 172
5. None of these
104. What approximate value should come in place of the question mark (?)
 $54.786 \div 10.121 \times 4.454 = ?$
1. 84 2. 48
3. 118 4. 58
5. 24
105. A plot of 640 sq.ft. is available at the rate of Rs. 4,600 per sq.ft. If 30% of the total cost of the plot is to be paid for booking the plot, how much is the booking amount?
1. Rs. 9,38,100 2. Rs. 8,83,200
3. Rs. 9,83,200 4. Rs. 8,38,100
5. None of these
106. A single person takes 6 minutes to fill a bottle. If from 11 a.m. to 12.30 p.m., 1845 bottles are to be filled, how many persons should be employed on this job?
1. 121 2. 127 3. 135 4. 139
5. None of these
107. What is the compound interest accrued on an amount of Rs. 15,000, at the rate of 11 p.c.p.a at the end of 3 years?
1. Rs. 4,935,895 2. Rs. 5,514,465
3. Rs. 3,575,565 4. Rs. 5,825,345
5. None of these
108. The owner of a Computer shop charges his customer 13% more than the cost price. If a customer paid Rs. 15,933 for a Computer, then what was the cost price of the computer?
1. Rs. 14,100 2. Rs. 16,500
3. Rs. 12,700 4. Rs. 18,200
5. None of these
109. The cost of 12 Note-books and 16 Pens is Rs. 852. What is the cost of 9 Note-books and 12 Pens?
1. Rs. 743 2. Rs. 639
3. Rs. 567 4. Cannot be determined
5. None of these
110. If $(96)^2$ is added to the square of a number, the answer so obtained is 16441. What is the number?
1. 67 2. 73 3. 89 4. 91
5. None of these
111. In a class of 40 students and 5 teachers, each student got sweets that are 15% of the total number of students and each teacher got sweets that are 20% of the total number of students. How many sweets were there?
1. 260 2. 240 3. 320 4. 360
5. None of these
112. A sum of money is divided among A, B, C and D in the ratio of 3 : 7 : 9 : 13 respectively. If the share of B is Rs. 4,872, then what is the total amount of money of A & C together?
1. Rs. 8,352 2. Rs. 6,998
3. Rs. 9,784 4. Rs. 7,456
5. None of these
113. The average age of a man and his son is 18 years. The ratio of their ages in 5 : 1 respectively. What will be ratio of their ages after 6 years?
1. 10 : 3 2. 5 : 2 3. 4 : 3 4. 3 : 1
5. None of these
114. 42 percent of first number is 56 percent of the second number. What is the respective ratio of the first number to the second number?
1. 4 : 5 2. 31 : 42
3. 4 : 3 4. Cannot be determined
5. None of these
115. One-fifth of a number is 48. What will be 62% of that number?
1. 164.66 2. 148.8 3. 178.22 4. 182.44
5. None of these
116. In an examination it is required to get 310 of the aggregate marks to pass. A student gets 28% marks and is declared failed by 93 marks. What are the maximum aggregate marks a student can get?
1. 688 2. 765
3. 775 4. Cannot be determined
5. None of these
117. The difference between 67% of a number and 43% of the same number is 912. What is 19% of that number?
1. 608 2. 798 3. 722 4. 684
5. None of these
118. Mr. Vijay deposits an amount of Rs. 45,500 to obtain a simple interest at the rate of 11 p.c.p.a. for 3 years. What total amount will Mr. Vijay get at the end of 3 years?
1. Rs. 60,515 2. Rs. 60,015
3. Rs. 65,515 4. Rs. 62,015
5. None of these
119. Which number should replace both the question marks (?) in the following equation $\frac{?}{176} = \frac{44}{?}$
1. 92 2. 132 3. 76 4. 88
5. None of these
120. If an amount of Rs. 85,470 is distributed equally amongst 35 children, how much amount would each child get?
1. Rs. 2,552 2. Rs. 2,452
3. Rs. 2,542 4. Rs. 2,442
5. None of these

REASONING ABILITY

121. In a certain code DROWN is written as MXNSC. How is BREAK written in that code?
1. LBFSC 2. JBDSA 3. JZDQA 4. LZFCQ
5. None of these
122. Among M, N, T, R and D each having a different height, T is taller than D but shorter than M. R is taller than N but shorter than D. Who among them is the tallest?
1. D 2. T 3. M 4. R
5. N

123. How many such digits are there in the number 5436182 each of which is as far away from the beginning of the number as when the digits are arranged in ascending order within the number?

1. None 2. One 3. Two 4. Three
5. More than three

124. What should come next in the letter series given below?

D D E D E F D E F G D E F G H D E F G H I D E F G H I J D

1. D 2. E 3. F 4. J
5. None of these

125. The letters in the word MORTIFY are changed in such a way that the vowels are replaced by the previous letter in the English alphabet and the consonants are replaced by the next letter in the English alphabet. Which of the following will be the fourth letter from the right end of the new set of letters?

1. S 2. H 3. G 4. N
5. None of these

126. Four of the following five are alike in a certain way and so form a group. Which is the one that does not belong to that group?

1. Leaf 2. Flower 3. Petal 4. Fruit
5. Tree

127. Four of the following five are alike in a certain way and so form a group. Which is the one that does not belong to that group?

1. Garlic 2. Ginger 3. Carrot 4. Radish
5. Brinjal

128. How many meaningful English words can be made with the letters ALPE using each letter only once in each word?

1. None 2. One 3. Two 4. Three
5. More than three

129. Four of the following five are alike in a certain way and so form a group. Which is the one that does not belong to that group?

1. 24 2. 48 3. 32 4. 72
5. 64

130. How many such pairs of letters are there in the word CHAMBERS each of which has as many letters between them in the word as in the English alphabet?

1. None 2. One 3. Two 4. Three
5. More than three

Directions (Q. 131-140): In each of the questions below are given three statements followed by two conclusions numbered I and II. You have to take the given statements to be true even if they seem to be at variance from commonly known facts. Read all the conclusions and then decide which of the given conclusions logically follows from the given statements disregarding commonly known facts:

Given answer:

1. if only conclusion I follows.
2. if only conclusion II follows.
3. if either Conclusion I or II follows.
4. if neither Conclusion I nor II follows.

131. Statements

Some toys are desks
Some desks are pens
All pens are rods

Conclusions

- I. Some rods are toys
II. Some pens are toys

132. Statements

Some tables are huts.
No hut is ring.
All rings are bangles.

Conclusions:

- I. Some bangles are tables.
II. No bangle is table.

133. Statements

All stars are clouds
All clouds are rains
All rains are stones

Conclusions

- I. All rains are stars
II. All clouds are stones

134. Statements

All windows are doors
Some doors are buildings
All buildings are cages.

Conclusions

- I. Some cages are doors
II. Some buildings are windows.

135. Statements

Some chairs are rooms
All rooms are trees
All trees are poles

Conclusions

- I. Some poles are chairs
II. Some trees are chairs

Directions (Q. 136-140): Study the following arrangement carefully and answer these questions.

GM5ID#JKE2PT4W%AF3U8\$NV6Q@7H@B9*Z

136. Four of the following five are alike in a certain way based on their positions in the above arrangement and so form a group. Which is the one that does not belong to that group?

1. D J I 2. F U A
3. H @ 1 4. B * @
5. I # 5

137. What should come in place of the question mark (?) in the following series based on the above arrangement?

D J K 2 T 4 % F 3 ?

1. U \$ V 2. U \$ N
3. 8 N V 4. 8 N I

5. None of these

138. How many such numbers are there in the above arrangement, each of which is immediately preceded by a vowel and also immediately followed by a symbol?

1. None 2. One 3. Two 4. Three
5. More than three

139. How many such consonants are there in the above arrangement, each of which is immediately preceded by a number but not immediately followed by a consonant?

1. None 2. One 3. Two 4. Three
5. More than three

140. Which of the following is the fourth to the right of the twelfth from the right end of the above arrangement?

1. 8 2. 7 3. K 4. A
5. None of these

Directions (Q. 141-145): Study the following information carefully and answer these questions:

A, B, C, D, E, F, G and H are sitting around a circle facing at the center. F is third to the right of B who is third to the right of H. A is third to the left of H. C is fourth to the left of A. E is third to the right of D who is not a neighbour of A.

141. In which of the following pairs the second person is to the immediate right of the first person?

1. HC 2. BE 3. GB 4. FA
5. None of these

142. Who is second to the right of D?

1. F 2. G
3. A 4. Data inadequate
5. None of these

143. Who is third to the left of G?

1. H 2. D 3. C 4. F
5. None of these

144. Who is fourth to the left of C?

1. F 2. A
3. E 4. Data inadequate

145. What is B's position with respect to D?

- A. Fourth to the right
B. Fourth to the left
C. Fifth to the left
D. Fifth to the right
1. A only 2. B only
3. A and B only 4. C and D only
5. None of these

Directions (Q. 146-150): In each question below is given a group of letters followed by four combinations of digits/symbols numbered 1, 2, 3 and 4. You have to find out which of the combinations correctly represents the group of letters based on the following coding system and mark the number of that combination as the answer. If none of the four combinations correctly represents the group of letters, mark 5 i.e. "None of these" as the answer.

Letter:	P	M	A	K	T	I	J	E	R	N	D	F	U	W	B
Digit/Symbol:	7	#	8	%	1	9	2	@	3	©	\$	4	★	5	6
Conditions:															

- i. If both the first and the last letters of the group are consonants, both are to be coded as the code for the last letter.
ii. If the first letter is a consonant and the last letter is a vowel, the codes are to be interchanged.

146. BDATFE

1. 6\$8146 2. 6\$814@ 3. @814@ 4. @8146
5. None of these

147. AWBRND

1. \$563@8 2. 8563@8 3. 8365@8 4. 8536@8

5. None of these

148. EMNTKU

1. ★#©1%© 2. @#©14★ 3. @#©1%★ 4. #©©1%★
5. None of these

149. MDEAJI

1. 1\$@82# 2. #821 3. 1\$@821 4. #82#
5. None of these

150. RKUMFP

1. 7%★#43 2. 3★#47 3. 3%★#43 4. 3%★#47
5. None of these

Directions (Q. 151-155): In the following questions, the symbols \$, @, ©, % and ★ are used with the following meaning as illustrated below:

'P@Q' means 'P is not greater than Q'.

'P%Q' means 'P is not smaller than Q'.

'P★Q' means 'P is neither greater than nor smaller than Q'.

'P©Q' means 'P is neither greater than nor equal to Q'.

'P\$Q' means 'P is neither smaller than nor equal to Q'.

Now in each of the following questions assuming the given statements to be true, find which of the two conclusions I and II given below them is /are definitely true?

Give answer:

1. If only Conclusion I is true.
2. If only Conclusion II is true.
3. If either Conclusion I or II is true.
4. If neither Conclusion I nor II is true.
5. If both Conclusions I and II are true.

151. Statements:

R\$M, M©F, F%J

Conclusions:

I. R\$J II. F©R

152. Statements:

M©D, D@K, K★N

Conclusions:

I. N\$D II. K\$M

153. Statements:

B@D, D\$M, M★N

Conclusions:

I. N©D II. D\$N

154. Statements:

F\$W, W%J, J@N

Conclusions:

I. J@F II. N%W

155. Statements:

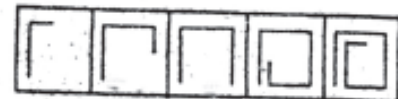
F©T, T%R, R\$W

Conclusions:

I. W©T II. R©T

Directions (Q. 156-160): In each of these questions which one of the five answer figure should come after the problem figures, if the sequence were continued?

156. Problem Figures

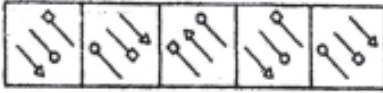


Answers Figures

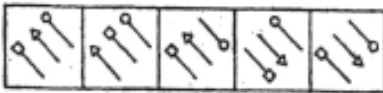


1 2 3 4 5

157. Problem Figures

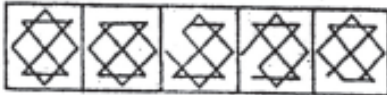


Answers Figures



1 2 3 4 5

158. Problem Figures



Answers Figures

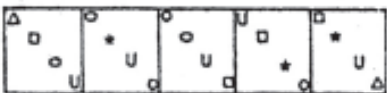


1 2 3 4 5

159. Problem Figures

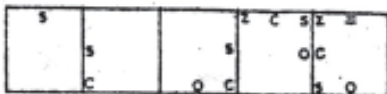


Answers Figures

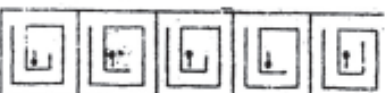


1 2 3 4 5

160. Problem Figures



Answers Figures



1 2 3 4 5

**MARKETING APTITUDE/
COMPUTER KNOWLEDGE**

161. Difference between Direct and Indirect Marketing is —

1. Direct Marketing is to Bank's employees
Indirect is to outsiders
2. Direct Marketing is to outsiders, Indirect is to employees
3. Direct Marketing is to Bank's owners, Indirect is to outsiders
4. Direct Marketing is to other Bank's employees, Indirect is to outsiders
5. None of these

162. Transaction Marketing means —

1. Marketing only to strangers
2. Mere selling of goods
3. Doing banking transactions
4. All of these
5. None of these

163. In Marketing it is necessary to identify —

1. Potential sellers
2. Selling employees
3. Potential products and services

4. Key existing and potential customers

5. All of these

164. NRI is an easy target for effective marketing because —

1. he likes Indian goods
2. he does not like Indian goods
3. he is easily approachable
4. it is cheaper to contact NRIs
5. There is an easy target for effective

165. A DSA helps in —

1. Boosting Direct Sales
2. Contacting customers on the Net
3. Indirect Marketing
4. Direct Telemarketing
5. None of these

166. Marketing is required for —

1. Boosting production
2. Boosting sales
3. Boosting profits
4. Improving customer service
5. All of these

167. A cold call is —

1. Best way to do Marketing
2. A last resort for marketers
3. Marketing at random
4. All of the above
5. None of these

168. A call can be effective by —

1. Making a phone call
2. Sending an e-mail
3. Calling on friends
4. Service with several facilities
5. Personality calling on prospective customers

169. Good Selling skill involves —

1. Alertness
2. Knowledge of competition
3. Perseverance
4. Empathy
5. All of these

170. Which of the following is not a channel for bank marketing ?

1. Telemarketing
2. Internet Banking
3. Mobile Banking
4. Existing satisfied customers
5. None of these

171. A Prospect means —

1. a person likely to work in a Bank
2. college syllabus
3. a Religious head
4. a likely buyer
5. None off these

172. Product development is —

1. Useful for bank marketing
2. Not useful for bank marketing
3. They have no role to play in bank marketing
4. All of these
5. None of these

173. Marketing is successful when —

1. Demand exceeds supply
2. Supply exceeds demand
3. Exports are heavy and costly
4. Salesmen are effectively trained
5. All the above situations

174. In Marketing, Market penetration means —

1. Entering likely Purchasers houses
2. Entering stores and shops
3. Covering a wide area of the market
4. All of these
5. None of these

175. Innovation helps in —

1. Designing new products
2. Improving marketing functions
3. Increasing sales
4. New methods for increasing prospects
5. All of these

176. Marketing Strategy means —

1. New ideas to lure more Customers
2. New methods to retain the customers
3. New ways to contact the new customers
4. New marketing techniques
5. All of these

177. Successful Marketing strategies need —

1. Knowledge of customers tastes
2. Good leadership
3. Proper direction and guidance
4. Knowledge of peers
5. All of these

178. Promotion means —

1. Additional responsibility
2. Doing research in Marketing
3. Advertisement and publicity for marketing
4. Going up the ladder in Government establishments
5. All of these

179. Diversification means —

1. Marketing in diverse countries
2. Marketing in diverse companies
3. Making new, diverse products
4. Used only for transactions with foreign countries
5. All of these

180. Motivation is very much required for effective marketing. What other qualities are required?

1. Confidence
2. Effective communication skills
3. Teamwork
4. Perseverance
5. All of these

181. What menu is selected to print?

1. Edit
2. Special
3. File
4. Tools
5. None of these

182. The name a user assigns to a document is called a(n) —

1. filename
2. program
3. record
4. data
5. None of these

183. A — is an electronic device that processes data, converting it into information.

1. processor

3. case

4. stylus

5. None of these

184. — are words that a programming language has set aside for its own use.

1. Control words
2. Reserved words
3. Reserved keys
4. Control structures
5. None of these

185. What are the two types of output devices?

1. Monitor and printer
2. Storage disks (floppy, CD)
3. Keyboard and mouse
4. Windows 2000, Windows NT
5. None of these

186. To access properties of an object, the mouse technique to use is —

1. dragging
2. dropping
3. right-clicking
4. shift-clicking
5. None of these

187. A(n) — is a program that makes the computer easier to use.

1. operating system
2. application
3. utility
4. network
5. None of these

188. Connections to the Internet using a phone line and a modem are called — connections.

1. digital
2. dial-up
3. broadband
4. dish
5. None of these

189. To access a mainframe or supercomputer, users often use a —

1. terminal
2. node
3. desktop
4. handheld
5. None of these

190. A flaw in a program that causes it to produce incorrect or inappropriate results is called a....

1. bug
2. byte
3. attribute
4. unit problem
5. None of these

191. A Web site address is a unique name that identifies a specific — on the Web.

1. Web browser
2. PDA
3. Web site
4. link
5. None of these

192. Every component of your computer is either....

1. hardware or software
2. software or CPU/RAM
3. application software or system software.
4. input devices or output devices
5. None of these

193. To make the number pad act as directional arrows, you press the — key.

1. num lock
2. caps lock
3. arrow lock
4. shift
5. None of these

194. When creating a word-processed document, this step involves the user changing how words on the page appear, both on the screen and in printed form.

1. Editing text

2. Inserting tables and indexes
3. Formatting text
4. Proofing documents
5. None of these
195. The — performs simple mathematics for the CPU.
1. ALU 2. DIMM 3. BUS 4. Register
5. None of these
196. Reusable optical storage will typically have the acronym —
1. CD 2. RW 3. DVD 4. ROM
5. None of these
197. — is processed by the computer into information.
1. numbers 2. processor
3. input 4. data
5. None of these
198. Personal computers can be connected together to form a —
1. server 2. supercomputer
3. enterprise 4. network
5. None of these
199. A word in a web page that, when clicked, opens another document is called —
1. anchor 2. hyperlink
3. reference 4. URL
5. None of these
200. The — of software contains lists of commands and options.
1. title bar 2. menu bar
3. formula bar 4. tool bar
5. None of these

SRI KRISHNA VENI BANKING COACHING CENTRE KEY SHEET -09

1)1	2) 2	3) 3	4) 4	5) 5	6) 3	7)4	8)3	9) 1	10) 1
11) 4	12)2	13)5	14) 5	15)2	16) 3	17)4	18) 5	19)4	20) 5
21)2	22)3	23)3	24)5	25)4	26)2	27)3	28)5	29)1	30)2
31)2	32)5	33)5	34)3	35)2	36)3	37)4	38)1	39)1	40)5
41)2	42)1	43)4	44)1	45)3	46)1	47)5	48)3	49)4	50)2
51)5	52)2	53)4	54)1	55)3	56)4	57)2	58)3	59)5	60)1
61)5	62)3	63)1	64)2	65)4	66)1	67)2	68)4	69)5	70)3
71)4	72)2	73)1	74)3	75)5	76)2	77)1	78)3	79)4	80)1
81)2	82)3	83)1	84)3	85)5	86)1	87)4	88)1	89)5	90)4
91)4	92)3	93)2	94)3	95)5	96)4	97)4	98)1	99)5	100)2
101)1	102)4	103)3	104)5	105)2	106)5	107)2	108)1	109)2	110)5
111)5	112)1	113)4	114)3	115)2	116)3	117)3	118)1	119)4	120)4
121)2	122)3	123)2	124)2	125)5	126)3	127)5	128)5	129)5	130)3
131)4	132)3	133)2	134)1	135)5	136)3	137)3	138)2	139)4	140)2
141)1	142)5	143)3	144)2	145)3	146)4	147)2	148)3	149)5	150)5
151)4	152)2	153)2	154)5	155)1	156)5	157)3	158)2	159)4	160)4
161) 2	162)2	163)4	164)5	165)1	166)4	167)1	168)5	169)5	170)3
171)4	172)1	173)4	174)3	175)3	176)5	177)1	178)3	179)3	180)5
181)3	182)1	183)1	184)1	185)1	186)3	187)1	188)2	189)1	190)1
191)3	192)1	193)1	194)3	195)1	196)2	197)4	198)4	199)2	200)2