

SRI KRISHNAVENI BANKING COACHING CENTRE

YEMMIGANUR, CELL: 9885303408. www.krishnaveni632.yolasite.com

MAXMARKS:200

MODEL PAPER-10

TIME:135 MINI

GENERAL AWARENESS

- 1) Which of the following banks launched a financing scheme for women fashion boutique owners known as Boutique Financing on April 15, 2014?
1) Allahabad Bank 2) Bank of India
3) ICICI Bank 4) Bharatiya Mahila Bank
5) State Bank of India
- 2) Which of the following films won the best popular film providing wholesome entertainment at the 61st National Film Awards announced on April 16, 2014?
1) Chennai Express 2) Bhaag Milkha Bhaag
3) Yeh Jawaani Hai Deewani 4) Aashiqui-2
5) Raanjhanaa
- 3) Gabriel Garcia Marquez, the Nobel-winning Colombian author, passed away on April 17, 2014. Which one of the following books was not written by him?
1) One hundred years of solitude
2) The Autumn of the patriarch
3) Love in the Time of Cholera
4) Of love and other Demons 5) My name is Red
- 4) Who took over as the 22nd Chief of Indian Navy on April 17, 2014?
1) Satish soni 2) Sunil Lamba 3) Shekhar Sinha
4) Robin K. Dhowan 5) None of these
- 5) Abdelaziz Bouteflika won a fourth term as the President of which of the following African countries in April 2014?
1) Nigeria 2) Sudan 3) Somalia
4) Ethiopia 5) Algeria
- 6) In January 2014, which one of the following banks became the first Indian Private sector bank to open a branch in China?
1) ICICI Bank 2) HDFC Bank 3) Axis bank
4) Yes Bank 5) Kotak Mahindra Bank
- 7) Which public sector bank named shikhar Dhawan, a cricketer, as its brand ambassador in March 2014?
1) Corporation Bank 2) Vijaya Bank
3) Indian Overseas Bank 4) Canara Bank
5) Punjab National Bank
- 8) The Reserve Bank of India has extended the deadline to Exchange pre-2005 currency notes till?
1) September 30, 2014 2) December 31, 2014
3) March 31, 2015 4) October 31, 2014
5) January 1, 2015
- 9) Jhilius Baer Group is a private banking group based in which of the following European countries?
1) France 2) Switzerland 3) Norway
4) Denmark 5) Germany
- 10) The offspring of an elephant Walrus or a whale is called?
1) Cub 2) Colt 3) Calf 4) Kid 5) Hatching
- 11) The currency of Bulgaria is?
1) Zloty 2) Forint 3) Krona 4) Lev 5) Dollar
- 12) Indira point, the southernmost point of India, is situated in?
1) Kerala 2) Tamil Nadu 3) Lakshadweep
4) Andaman and Nicobar Islands
5) Puducherry
- 13) Which of the following is the capital of Estonia
1) Tallinn 2) Pristina 3) Riga
4) Valletta 5) Dibreville
- 14) Which of the following countries is not a member of BIMSTEC?
1) Bhutan 2) India 3) Myanmar
4) Thailand 5) China
- 15) "Sachin Born to Bat : The Journey of Cricket's Ultimate Centurion is Written by?
1) Khalid A-H Ansari 2) Ayaz Memon
3) Harsha Bhogle 4) Boria Majumdar
5) Vijay Lokapally
- 16) In which of the following countries is coconut Triangle situated?
1) Mauritius 2) Maldives 3) Sri Lanka
4) India 5) Malaysia
- 17) The Red River is situated in?
1) China 2) Myanmar 3) Japan 4) Vietnam
5) North Korea
- 18) Identify the mismatched pair?
1) NSDL-National securities Depository Limited
2) OBE-Order of the British Empire
3) BIFR-Bureau for Industrial and Financial Rehabilitation
4) SLR- Statutory Liquidity Ratio
5) CCEA-Cabinet Committee on Economic Affairs
- 19) World Thrift day is observed every year on?
1) September 30 2) July 31 3) November 30
4) October 31 5) August 31
- 20) Which part of the Indian constitution is associated with the provisions of Citizenship?
1) Part I 2) Part II 3) Part III
4) Part IV 5) Part V
- 21) Which scheme was launched to provide pension to people in unorganized sectors?

- 1) Swabhimana 2) Swadhar 3) Jeevan Dhara
4) Jeevan Kalyan 5) None of these
- 22) ATMs that are owned and managed by non banking entities are called ?
1) Offsite ATMs 2) Red ATMs
3) Black Label ATMs 4) White label ATMs
5) Third party ATMs
- 23) World Bank helps countries with loans for the purpose of ?
1) Stimulating private investment
2) Tackling foreign exchange crises
3) Reconstruction and development
4) Meeting deficits in government budget
5) None of these
- 24) As part of the India Food Banking Network (IFBN) the first food bank was launched in ?
1) Hyderabad 2) Delhi 3) Kanpur
4) Amethi 5) Bangalore
- 25) The Global Hunger Index (GHI) was first published in ?
1) 2005 2) 2006 3) 1995 4) 1996 5) 2000
- 26) Which of the following is/are the indicators for Global Hunger Index?
1) Undernourishment 2) Underweight Children
3) Child mortality rate 4) Both 1 and 2
5) All 1, 2 and 3
- 27) Byssinosis, also called 'Brown lung disease', is common in the workers of ?
1) Ceramic industry 2) Rubber industry
3) Textile industry 4) Iron and steel industry
5) None of these
- 28) Democratic decentralization refers to ?
1) Parliamentary Government
2) Federal Government
3) Democratic Government
4) Local Government 5) None
- 29) Which one of the following countries is not a member of OPEC ?
1) Algeria 2) Nigeria 3) Venezuela
4) Ecuador 5) Brazil
- 30) Which of the following ensures grass root democracy in India ?
1) Inter state Council
2) Planning Commission
3) Finance Commission
4) National Integration council
5) Panchayati Raj
- 31) The Gilgit Lotus Sutra Manuscripts are related to ?
1) Buddhism 2) Jainism 3) Hinduism
4) Judaism 5) Zoroastrianism
- 32) List of women winners of Nobel Prizes is given. Who among the following did not win the Nobel Prize for Literature?
1) Alice Munro 2) Herta Mueller
- 3) Doris Lessing 4) Toni Morrison
5) Aung san suu kyi
- 33) List of Authors and Books is given below. Identify the Mismatched pair?
1) Jim crace-Harvest
2) Eleanor Catton-the Luminaries
3) Ruth Ozeki-The Tale for the Time Being
4) Colm Toibin -The Testament Of mary
5) Jhumpa Lahiri -we Need new Names
- 34) The goals of the United states Agency for International Development (USAID) include?
1) Disaster relief 2) Poverty relief
3) Socioeconomic development
4) Both 1 and 2 5) All 1, 2 and 3
- 35) Which was the first film to win the Film fare best Movie award in 1954 ?
1) Do Bigha Zamin 2) Boot polish 3) Alam ara
4) Mother India 5) Daag
- 36) Who is the author of the novel 'The Godfather' ?
1) Gunter Grass 2) Erich seagal 3) Mario puzo
4) Francis ford Coppola 5) V.S.Naipaul
- 37) What is the Unit of Frequency ?
1) Newton 2) Radian 3) Pascal
4) Hertz 5) Volt
- 38) Jamsheerpur is located on the river ?
1) Damodar 2) Subarnarekha 3) Chambal
4) Mahanadi 5) Gomti
- 39) Who was the first Muslim to be elected as President of the Indian National Congress ?
1) Aga Khan 2) Syed Ahmad Khan
3) Badruddin Tyabji 4) Muhammad Ali Jinnah
5) None of these
- 40) The exhaustion of soil fertility is the result of ?
1) Cover Cropping 2) Inter Cropping
3) Double Cropping 4) Crop rotation
5) Over cropping

ENGLISH LANGUAGE

Directions (41-50): Read the following passage carefully and answer the questions given below it. Certain words have been printed in **bold** to help you locate them while answering some of the question.

There was a girl who sang beautifully at the temple every morning. The music master used to happily recall, "One day when I went into the woods to pluck flowers, I found this baby under a pipal tree". He picked her up carefully, **raised** her lovingly as if she were his daughter and taught her to sing before she spoke her first word.

The music master grew old and didn't see to well. The girl tended to him caringly. Many people including young men travelled from far and wide to hear her sing. This made the music master's heart quake with fear. "You will choose one of them as your husband. What is to become of me?" The girl replied, "I shall not be apart from you". But on a full moon night during the harvest festival, the master's chief disciple touched his feet reverently and said, "Master, grant me your permission for your daughter has agreed to marry me." The master's tears flowed freely, "She has chosen well. Go and fetch her let me hear you sing the first of many melodies that you will sing together." The two began to sing in harmony. But the song was interrupted by the arrival of the royal messenger. "Your daughter is very **fortunate** the king has sent for her", the messenger said. At the palace the queen summoned the girl to her and said, "I place upon you the honour of making sure my daughter is never unhappy at her husband's home. There wasn't a single tear in the girl's eyes but she thought of the master and her heart was heavy.

That very night the princess began her journey to Kambhoj. The princess's royal chariot led the procession and the girl's palanquin followed close behind carrying trunks of silk, jewellery and precious stones. It was covered with a velvet sheet and had soldiers on the both sides. As the procession passed, the master and his disciple Kumarsen stood still by wayside. A **collective** sigh escaped the crowd gathered there wishing that the princes wouldn't feel homesick in her faraway home.

41. Which of the following can be said about the girl?

- She was brought up by her father as her mother had died when she was a baby.
 - She was a talented singer who had learnt to sing at an early age.
 - She was only allowed to sing with the master's permission.
- Only A
 - Both A and B
 - Only B
 - All A, B and C
 - None of these

42. What was the girl's reaction to leaving home?

- She was honoured to be serving the princess.
- Sadness at leaving the master.
- She entrusted the task of looking after the music master to Kumarsen.
- She was thrilled to be living in luxury.
- None of these

43. What task was entrusted to the girl by the queen?

- Seeing that her daughter reached Kambhoj safely.
- Entertaining the princess on her journey to Kambhoj.
- Protecting the princes and reporting to the queen if she was unhappy.
- Entrusting the princess happiness.
- None of these

44. What was the master's reaction to the girl's decision to marry his disciple?

- He was upset and cried.
- He promised to give his permission if the couple sang well together.
- He was sad because she would be going to Kambhoj which was far away.
- He was pleased with her choice of husband.
- None of these

45. Which of the following is not true in the context of the passage?

- She was going to her prospective husband's home to get engaged.
- Her parents wanted her to visit the kingdom of which she would be the future queen.
- To take expensive gifts for the rules of the Kambhoj who were well known to her parents.

- Only A
- Both A and B
- All A, B and C
- Both A and C
- None of these

46. Why was the princess going on a journey?

- She was going to her prospective husband's home to get engaged.
- Her parents wanted her to visit the kingdom of which she would be the future queen.
- To take expensive gifts for the rules of the Kambhoj who were well known to her parents.

- None
- Only B
- Only A
- Both A and B
- Both B and C

47. Why was the master afraid?

- He felt the princess would treat the young girl unkindly.
- He would be all alone after the girl's marriage.
- The girl may not be able to adapt to her new home.
- He was slowly going blind.
- None of these

Directions (48-49): Choose the word which is most nearly the **SAME** in meaning to the word printed in **bold** as used in the passage.

48. Fortunate

- rich
- liked
- happy
- successful
- lucky

49. Raised

- nurtured
- lifted
- grew
- built
- high

50. Choose the word which is most OPPOSITE in meaning to the word collective as used in the passage.

- alone
- separately
- united
- partial
- single

Directions (51-55): Read each sentence to find out if there is any error in it. The error, if any, will be in one part of the sentence. The number of that part is the answer. If there is no error the answer is (5). (Ignore errors of punctuation, if any).

- In present the (1) price of food grains (2) are high all (3) over the world. (4) No error (5)
- Majority of the banks (1) today uses technology (2) to reach out to those (3) living in rural areas. (4) No error (5).
- I will give (1) you the advance (2) if you repay it as (3) soon as possibly. (4) No error (5)
- Though he is very (1) wealthy and powerful (2) he has any (3) concern for the poor. (4) No error (5)
- Mala has the (1) ability to handle (2) many tasks at (3) the same time. (4) No error (5)

Directions (56-60): Which of the phrases 1, 2, 3 and 4 given below should replace the phrase given in **bold** in the following sentence to make the sentence grammatically meaningful and correct. If the sentence is correct as it is and 'No correction is required', mark 5 as the answer.

56. Finding himself in financial difficulty, he **came forward** me for help and advice.
 1. come across 2. is come upto
 3. came to 4. come with
 5. No correction required
57. Deepak **having been over** eighteen years of age, is entitled to vote.
 1. has been of 2. being over
 3. who is having over 4. who is been
 5. No correction required
58. The magazine **that we subscribed** to is published monthly.
 1. which is subscribed 2. we are subscribed
 3. whom we subscribe 4. whichever we subscribe
 5. No correction required
59. **Among of his** many good qualities, that I remember is his honesty.
 1. All of his 2. Some of the
 3. Only of his 4. One of his
 5. No correction required
60. Many of our clients **have deposit of** this foreign bank.
 1. have deposits in 2. had deposited
 3. with deposits 4. have deposited
 5. No correction required

Directions (61-65): Rearrange the following six sentences A, B, C, D and E and F in the proper sequence to form a meaningful paragraph; then answer the questions given below them.

- A. The sailor was told it was placed there as a warning signal to sailors to warn them of danger.
 B. He returned to the spot a few years latter as captain of his own ship.
 C. The ship was at sea for may days and finally anchored near the coastline.
 D. The night was stormy and without a warning signal his ship was wrecked on that very rock.
 E. One of the sailors on board saw a bell tied to a dangerous submerged rock.
 F. As a joke the sailor decided to steal the bell and hide it despite being informed of this.
61. Which of the following should be the **FIRST** sentence after rearrangement?
 1. A 2. B 3. C 4. D
 5. E
62. Which of the following should be the **SECOND** sentence after rearrangement?
 1. A 2. B 3. C 4. D
 5. E
63. Which of the following should be the **THIRD** sentence after rearrangement?
 1. A 2. B 3. C 4. D
 5. E
64. Which of the following should be the **FIFTH** sentence after rearrangement?
 1. A 2. B 3. C 4. D
 5. E
65. Which of the following should be the **SIXTH (LAST)** sentence after rearrangement?
 1. A 2. B 3. C 4. D
 5. E

Directions (66-70): In each question below a sentence with four words printed in bold type is given. These are numbered as 1, 2, 3 and 4. One of these four words printed in bold may be either wrongly spelt or inappropriate in the context of the sentence. Find out the word, which is wrongly spelt or inappropriate, if any. The number of the word is your answer. If all the words printed in bold are correctly spelt and also appropriate in the context of the sentence, mark 5 i.e. 'All correct' as your answer.

ed in **bold** may be either wrongly spelt or inappropriate in the context of the sentence. Find out the word, which is wrongly spelt or inappropriate, if any. The number of the word is your answer. If all the words printed in bold are correctly spelt and also appropriate in the context of the sentence, mark 5 i.e. 'All correct' as your answer.

66. We have **incurred** (1) an **expense** (2) of over fifty **thousands** (3) this year **alone**. (4) All correct (5)
67. World Earth Day is **celebrated** (1) as a **means** (2) to make people **aware** (3) about the **environment**. (4) All correct (5)
68. The key **issue** (1) **discused** (2) at the meeting was how to **resolve** (3) the food **crisis**. (4) All correct (5)
69. He **deserves** (1) some **recognition** (2) for working **diligently** (3) for the **passed** (4) five years. All correct (5)
70. There are many **employment** (1) **oppotunities** (2) for fresh graduates (3) in the **market** (4) today. All correct (5)

Directions (71-80): In the following passage there are blanks each of which has been numbered. These numbers are printed below the passage and against each five words are suggested one of which fits the blank appropriately. Find out the appropriate word in each case.

I had (71) to become a multipurpose manager. I took three steps to accomplish this. First, I took very (72) part in professional associations. I (73) the National President of the Indian Society for Training and Development one of the (74) organisations for HR professionals. This helped me to grow professionally. My communication skills (75). It also taught me (76) to conduct meetings in an effective manner. My job (77) me to different parts of the country and (78) believe that (79) provided me with an education. I also wrote a lot. Newspaper editors often approached me with (80) to write articles for their publications.

71. 1. achieved 2. aim 3. try 4. dreamed
 5. wanted
72. 1. selected 2. active 3. interesting 4. often
 5. joint
73. 1. elected 2. voted 3. became 4. applied
 5. decided
74. 1. respected 2. status 3. impressed 4. aged
 5. common
75. 1. lacked 2. grown 3. learnt 4. improved
 5. earned
76. 1. that 2. why 3. how 4. never
 5. anyhow
77. 1. saw 2. showed 3. posted 4. discovered
 5. took
78. 1. quiet 2. firmly 3. strong 4. first
 5. not
79. 1. travelling 2. journey 3. visit 4. migrating
 5. shift
80. 1. wish 2. offer
 3. appointment 4. requests
 5. commands

QUANTITATIVE APTITUDE

Directions (81-100): What should come in place of the question mark (?) in the following questions?

81. $\frac{15 \times 11 + 45}{13 \times 9 - 30} = ?$
 1. $2\frac{1}{5}$ 2. $3\frac{1}{7}$ 3. $5\frac{3}{10}$ 4. $3\frac{8}{17}$
 5. None of these
82. $39852 \div \sqrt{7} = 81 \times 12$
 1. 41 2. 1849 3. 1681 4. 43
 5. None of these

83. $54679 + 34521 = ? + 43668$
 1. 45352 2. 45232 3. 42455 4. 45552
 5. None of these
84. $44\% \text{ of } 766 + ? = 900$
 1. 498.48 2. 562.96 3. 574.80 4. 444.64
 5. None of these
85. $67\% \text{ of } (?) = 5287.64$
 1. 7080 2. 6442 3. 6938 4. 6739
 5. None of these
86. $\sqrt{17956} = ?$
 1. 134 2. 144 3. 124 4. 104
 5. None of these
87. $30\% \text{ of } 200 + \sqrt{7} = 48\% \text{ of } 550 - 10\% \text{ of } 150$
 1. 600 2. 21 3. 189 4. 35721
 5. None of these
88. $11.6 \times 8.9 \times 5.1 = ?$
 1. 398.264 2. 664.358 3. 468.428 4. 526.524
 5. None of these
89. $2637 + 36 = ?$
 1. 73.25 2. 68 3. 66.5 4. 71
 5. None of these
90. $11160 \div 45 \div 8 = ?$
 1. 29 2. 31 3. 43 4. 47
 5. None of these
91. $18 \times 8 + (7)^2 = (15)^2$
 1. 9 2. 81 3. 18 4. 27
 5. None of these
92. $66\% \text{ of } 546 - 43\% \text{ of } 439 = ?$
 1. 103.57 2. 111.71 3. 138.63 4. 171.59
 5. None of these
93. $975 + 714 \div 42 = ?$
 1. 124 2. 992 3. 888 4. 40
 5. None of these
94. $(62)^2 + (14)^2 = (7)^2 + 559$
 1. 56 2. 48 3. 59 4. 53
 5. None of these
95. $? + 40 \times 9 = 378$
 1. 1616 2. 1648 3. 1696 4. 1680
 5. None of these
96. $2 \frac{1}{4} + 3 \frac{3}{4} - 1 \frac{2}{3} = ?$
 1. $4 \frac{1}{3}$ 2. $4 \frac{1}{4}$ 3. $4 \frac{2}{3}$ 4. $4 \frac{3}{5}$
 5. None of these
97. $45\% \text{ of } 1200 = 54\% \text{ of } ?$
 1. 1080 2. 1320 3. 1240 4. 720
 5. None of these
98. $1354 + 1184 = ? \% \text{ of } 5640$
 1. 36 2. 42 3. 45 4. 52
 5. None of these
99. $5 \frac{1}{8} \text{ of } 208 + 786 = 2000 - ?$
 1. 112 2. 148 3. 184 4. 124
 5. None of these
100. $546 + 222 \div 6 \times 9 = ?$
 1. 982 2. 997 3. 879 4. 839
 5. None of these
101. The difference between 56% of a number and 41% of the same number is 660. What is 8% of that number?
 1. 321 2. 386 3. 345 4. 358
 5. None of these
102. What should come in place of the question mark (?) in the following number series?
 1 5 17 53 161 485 ?
 1. 1168 2. 1254 3. 1457 4. 1372
 5. None of these
103. The simple interest accrued on a amount of Rs.12,450 at the end of 6 years is Rs.8,964. What is the rate of interest p.c.p.a.?
 1. 8 2. 14 3. 10 4. 12
 5. None of these
104. A plot of 575 square feet is available at the rate of Rs.5,500 per square feet. If 25% of the total cost of the plot is to be paid for booking the plot, how much is the booking amount?
 1. Rs. 825750 2. Rs. 790625
 3. Rs. 875250 4. Rs. 735500
 5. None of these
105. If the product of two successive positive integers is 7482, which is the greater integer?
 1. 87 2. 82 3. 84 4. 89
 5. None of these
106. Ms. Anisha deposits an amount of Rs.35000 to obtain a simple interest at the rate of 15 p.c.p.a. for 4 years. What total amount will Ms. Anisha get at the end of 4 years?
 1. Rs.66000 2. Rs.60500 3. Rs.52000 4. Rs.48500
 5. None of these
107. What is the compound interest accrued on an amount of Rs.12000 at the rate of 9 p.c.p.a. at the end of 2 years.
 1. Rs.2545 2. Rs.2257.2 3. Rs. 2986 4. Rs. 2775.4
 5. None of these
108. One - seventh of a number is 51. What will be 64% of that number?
 1. 248.12 2. 228.48 3. 238.24 4. 198.36
 5. None of these
109. Of the two numbers, 48 per cent of first number is 60 per cent of the second number. What is the respective ratio of first number to the second number?
 1. 4:7 2. 3:4
 3. 5:4 4. Cannot be determined
 5. None of these
110. What approximate value should come in place of the question mark (?) in the following question?
 $45.709 + 11.342 \times 6.667 = ?$
 1. 88 2. 46 3. 112 4. 56
 5. 27
111. The owner of a Television shop charges his customer 16% more than the cost price. If a customer paid Rs.16588 for a Television, then what was the cost price of the Television?
 1. Rs. 14300 2. Rs. 15500
 3. Rs. 13800 4. Rs. 12000
 5. None of these
112. The average age of a man and his son is 48 years. The ratio of their ages is 11:5 respectively. What will be ratio of their ages after 6 years?
 1. 6:5 2. 5:3 3. 4:3 4. 2:1
 5. None of these
113. The cost of 20 folders and 15 pens is Rs.995. What is the cost of 12 folders and 9 pens?
 1. Rs. 652 2. Rs. 597
 3. Rs. 447 4. Cannot be determined
 5. None of these
114. In a class of 30 students and 2 teachers, each student got sweets that are 20% of the total number of students and each teacher got

sweets that are 30% of the total number of students. How many sweets were there?

1. 188 2. 180 3. 208 4. 178
5. None of these

115. If an amount of Rs.97836 is distributed equally amongst 31 children, how much amount would each child get?

1. Rs. 3756 2. Rs. 3556 3. Rs.3356 4. Rs. 3156
5. None of these

116. If $(58)^2$ is added to the square of a number, the answer so obtained is 5668. What is the number?

1. 56 2. 33 3. 47 4. 51
5. None of these

117. In an examination it is required to get 380 of the aggregate marks to pass. A student gets 32% of marks and is declared failed by 76 marks. What are the maximum aggregate marks a student can get?

1. 945 2. 975
3. 950 4. Cannot be determined
5. None of these

118. Which number should replace both the question marks (?) in the following equation?

$$\frac{?}{188} = \frac{47}{?}$$

- 1.88 2. 124 3. 66 4. 94
5. None of these

119. A sum of money is divided among A, B, C and D in the ratio of 4 : 6 : 11 : 13 respectively. If the share of C is Rs.7854, then what is the total amount of money of B and D together?

1. Rs. 13,5662. Rs. 16,928
3. Rs. 12,7844. Rs. 15,676
5. None of these

120. A single person takes 8 minutes to type a page. If from 1.00 p.m. to 2.00 p.m., 1710 pages are to be typed, how many persons should be employed on this job?

1. 207 2. 221 3. 249 4. 256
5. None of these

REASONING ABILITY

121. How many such pairs of letters are there in the word BEHAVIOUR each of which has as many letters between them in the word as in the English alphabet?

1. None 2. One 3. Two 4. Three
5. More than three

122. How many such digits are there in the number 764528 each of which is as far away from the beginning of the number as when the digits are arranged in descending order within the number?

1. None 2. One 3. Two 4. Three
5. More than three

123. What should come next in the letter series given below?

ABABCA BCDAB CDEAB CDEFABC
DEFGABC

1. D 2. E 3. F 4. H
5. None of these

124. How many meaningful English words can be made with the letters EPRY using each letter only once in each word?

1. None 2. One 3. Two 4. Three
5. More than three

125. J, D, L, H and F each travelling to station, each one reaches at a different time. L reaches only

after J and D reaches only before F. Who amongst them is third to reach?

1. F 2. L
3. D 4. Cannot be determined
5. None of these

126. Four of the following five are alike in a certain way and so form a group. Which is the one that does not belong to that group?

1. 21 2. 35 3. 42 4. 56
5. 49

127. In a certain code ALIVE is written as WFHBM. How is VALUE written in that code?

1. VFMWB 2. VFKWB 3. WBAVF 4. WBKVF
5. None of these

128. The letters in the word DANGEROUS are changed in such a way that the consonants are replaced by the previous letter in the English alphabet and the vowels are replaced by the next letter in the English alphabet. Which of the following will be the third letter from the left end of the new set of letters?

1. B 2. M 3. O 4. L
5. None of these

129. Four of the following five are alike in a certain way and so form a group. Which is the one that does not belong to that group?

1. Table 2. Desk 3. Wardrobe 4. Computer
5. Chair

130. Four of the following five are alike in a certain way and so form a group. Which is one that does not belong to that group?

1. Orange 2. Apple 3. Guava 4. Papaya
5. Mango

Directions (131- 135): In each of the question below are given three statements followed by two conclusions numbered I and II. You have to take the given statements to be true even if they seem to be a variance from commonly known facts. Read all the conclusions and then decide which of the given conclusions logically follows from the given statements disregarding commonly known facts.

Give answer 1 if only conclusion I follows.

Give answer 2 if only conclusion II follows.

Give answer 3 if either conclusion I or II follows.

Give answer 4 if neither conclusion I nor II follows.

Give answer 5 if both conclusions I and II follow.

131. Statements:

Some doors are windows.

All windows are floors.

All floors are ceilings.

Conclusions:

I. Some doors are floors.

II. All windows are ceilings.

132. Statements:

Some computers are books.

Some books are pens.

All pens are notebooks.

Conclusions:

I. Some books are notebooks.

II. Some notebooks are computers.

133. Statements:

All fruits are flowers.

No flower is sweet.

Some sweets are deserts.

Conclusions:

I. Some deserts are flowers.

II. No desert is flower.

134. Statements:

All bottles are jars.
Some jars are bowls.
Some bowls are buckets.

Conclusions:

- I. Some bottles are bowls.
II. Some buckets are jars.

135. Statements:

Some shoes are socks.
All socks are sandals.
All sandals are trousers.

Conclusions:

- I. All trousers are socks.
II. Some sandals are shoes.

Directions(136-140): Study the following arrangement carefully and answer the questions given below:

H T 7 L E \$ 2 Y # W 4 I F @ V 3 A 8 % K 1 M @ 5 G U 6 C

136. Which of the following is the fifth to the left of the fourteenth from the left end of the above arrangement?

1. # 2. W 3. Y 4. K
5. None of these

137. How many such vowels are there in the above arrangement, each of which is immediately preceded by a number but not immediately followed by a symbol?

1. None 2. One 3. Two 4. Three
5. More than three

138. Four of the following five are alike in a certain way based on their positions in the above arrangement and so form a group. Which is the one that does not belong to that group?

1. H E 7 2. 2 4 # 3. K 5 M 4. 3 K 8
5. F V A

139. How many such consonants are there in the above arrangement, each of which is immediately preceded by a number and also immediately followed by a symbol?

1. None 2. One 3. Two 4. Three
5. More than three

140. What should come in place of the question mark (?) in the following series based on the above arrangement?

- T 7 E Y # 4 @ V A ?
1. K M @ 2. % K M 3. % 1 M 4. K 1 @
5. None of these

Directions (141 - 144): Study the following information carefully and answer the questions given below:

M, D, J, Q, T, F, H and N are sitting around a circle facing at the centre. T is third to the right of F who is second to the left of M. Q is not a neighbour of T or F and is third to the left of H. J is second to the right of N.

141. Who is second to the left of H?

1. T 2. F
3. Q 4. Data inadequate
5. None of these

142. Who is to the immediate left of M?

1. H 2. T 3. Q 4. J
5. None of these

143. In which of the following pairs the second person is to be immediate left of the first person?

1. MT 2. NQ 3. HF 4. DN
5. None of these

144. What is Q's position with respect of M?

- A. Fourth to the right B. Fourth to the left
C. Fifth to the left D. Fifth to the right

3. Either C or D

4. A and B only

5. None of these

145. Find the Odd one?

1. 28 2. 125 3. 9261 4. 1000
5. 512

Directions (146- 150): In each question below is given a group of letters followed by four combinations of digits/ symbols numbered 1, 2, 3 and 4. You have to find out which of the combinations correctly represents the group of letters based on the following coding system and mark the number of that combination as the answer. If none of the four combinations correctly represents the group of letters, mark (5) i.e. 'None of these' as the answer.

Letter: J H Q A R L E G T U M B C I P

Digit: 5 @ 2 8 1 9 % # 4 6 \$ * 3 7

Symbol

Conditions:

- If both the first and the last letters of the group are vowels, their codes are to be interchanged.
- If the first letter is a consonant and the last letter is a vowel, both are to be coded by the code for the consonant.

146. JQ G A L I

1. 32#893 2. 52#893 3. 52#895 4. 32#895
5. None of these

147. E B H R M T

1. % @ \$ 16 @ 2. % @ \$ 16 @ 3. 6 \$ @ 1 @ % 4. @ \$ @ 16 %
5. None of these

148. J G C H R E

1. % * * @ 13 2. 3 * * @ 1 % 3. 3 * * @ 13 4. % * * @ 1 %
5. None of these

149. B Q R L H A

1. \$ 219 @ 8 2. 8 219 @ \$ 3. 8 219 @ 8 4. \$ 219 @ \$
5. None of these

150. Q R L G H M

1. 219 # @ 2 2. 619 # @ 6 3. 619 # @ 2 4. 619 # @ 2
5. None of these

Directions (151-155): In the following questions, the symbols \$, @, %, and * are used with the following meaning as illustrated below:

P \$ Q means 'P is not smaller than Q'

P @ Q means 'P is not greater than Q'

P % Q means 'P is neither greater than nor smaller than Q'

P % Q means 'P is neither smaller than nor equal to Q'

P * Q means 'P is neither greater than nor equal to Q'

Now in each of the following questions assuming the given statements to be true, find which of the two conclusions I and II are given below them is/ are definitely true?

Give answer 1 if only Conclusion I is true.

Give answer 2 if only Conclusion II is true.

Give answer 3 if either Conclusion I or II is true.

Give answer 4 if neither Conclusion I nor II is true.

Give answer 5 if both Conclusions I and II are true.

151. Statements:

K @ B, B * J, J @ T

Conclusions:

I. K * T II. B @ T

152. Statements:

F \$ M, M @ L, L * W

Conclusions:

I. W \$ M II. F @ L

153. Statements:

R * Q, Q @ F, F % A

Conclusions:

I. R \$ A II. F @ L

154. Statements:

V \$ X, X © Y, Y % H

Conclusions:

I. Y © V

II. H ★ V

155. Statements:

M © B, B ★ A, A © F

Conclusions:

I. M ★ A

II. B ★ F

Directions (156 – 160): In each of the questions given below which one of the five answer figures on the right should come after the problem figures on the left, if the sequence were continued?

156. Problem Figures

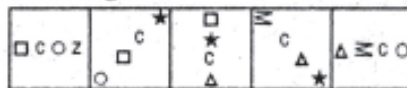


Answer Figures

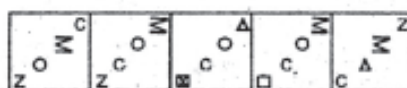


1 2 3 4 5

157. Problem Figures

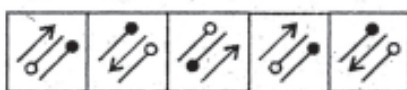


Answer Figures

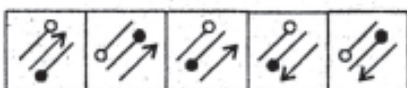


1 2 3 4 5

158. Problem Figures

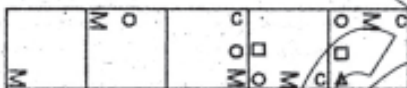


Answer Figures

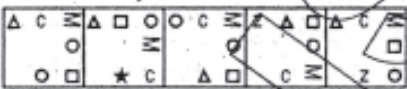


1 2 3 4 5

159. Problem Figures



Answer Figures

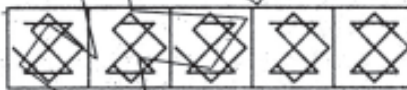


1 2 3 4 5

160. Problem Figures



Answer Figures



1 2 3 4 5

**MARKETING /
COMPUTERS KNOWLEDGE**

161. Bank Marketing means

1. Selling of banks
2. Buying of banks
3. Merger of banks
4. Selling bank's products and services
5. Selling various items in banks

162. Proper pricing is needed for

1. Extra charges for extra services
2. Levy of VAT
3. Good customer service
4. Putting burden on the customer
5. Service with extra facilities

163. A lead means

1. A Bank's marketing staff
2. A Religious leader
3. Bank's chairman
4. Target customer
5. Leash tied to a dog

164. A good salesman should be

1. Aggressive
2. Pushy
3. Fierce
4. Polite, but firm
5. Talkative

165. Relationship Selling means

1. Preparing a list of relatives
2. Cross-selling
3. Selling to relatives
4. Selling to strangers
5. Telemarketing

166. Find the incorrect statement

1. Marketing has no relevance in Public Sector Banks
2. Marketing has no relevance in Private Sector Banks
3. Marketing has no relevance in Foreign Banks
4. All of these
5. None of these

167. Marketing is not required in one of the following products. That is

1. Sale of Credit / Debit Cards
2. Sale of Net Banking
3. Sale of Corporate Loans
4. Sale of Retail Loans
5. None of these

168. HNI means

1. Highly Negative Individual
2. High Network Individual
3. High Neutral Individual
4. Highly Necessary Individual
5. All of these

169. Digital Banking means

1. Banking with calculators
2. Banking with digital instruments
3. Internet Banking and Telebanking
4. Export finance
5. None of these

170. Home Loans are granted to

1. Individuals
2. Institutions
3. Builders
4. All of these
5. None of these

171. Credit Cards are used for

1. Cash withdrawals
2. Purchase of air tickets
3. Purchase of consumable items from retail outlets
4. All of these
5. None of these

172. The ATMs are

1. Branches of banks
2. Manned counters of banks

3. Unmanned, cash dispensers
4. All of these
5. None of these
- 173. Internet Banking means**
1. Meeting of Banks on the Net
2. Net Practice
3. Banking transactions through internet
4. Transactions with foreign countries
5. All of these
- 174. Customer Loyalty means**
1. Shifting of customers from one bank to another
2. Customers banking with one bank exclusively
3. Customers returning lost items
4. Customer giving gifts to banks
5. None of these
- 175. A Marketing Plan is necessary for**
1. Having a focussed approach to marketing
2. To decide marketing strategies
3. To decide product strategy
4. To decide advertising strategy
5. All of these
- 176. Public Relations is required for**
1. Improving customer service in the company
2. Improving marketing functions in the company
3. Better atmosphere in the company
4. All of these
5. None of these
- 177. One of the following qualities is not required for effective marketing. That is**
1. Self - motivation
2. Effective communication skills
3. Team work
4. Perseverance
5. Sympathy
- 178. Gift of the gab means**
1. Distributing gifts
2. Collecting garbage
3. Multi-linguist
4. Good communication skills
5. Short - tempered
- 179. Rural Marketing involves**
1. Selling to farmers and agriculturists
2. Selling to rural households
3. Selling to rural industries
4. Arranging melas
5. All of these
- 180. Find the incorrect statement**
1. Marketing is redundant in computerised banks
2. Marketing is redundant in foreign countries
3. Marketing is redundant in private establishments
4. Marketing is redundant in Government establishments
5. All of these
- 181. What menu is selected to cut, copy, and paste?**
1. File 2. Tools 3. Special 4. Edit
5. None of these
- 182. The most important or powerful computer in a typical network is**
1. desktop 2. network client
3. network server 4. network station
5. None of these
- 183. The primary purpose of software is to turn data into**
1. Web sites 2. information
3. programs 4. objects
5. None of these
- 184. The ability to find an individual item in a file immediately ____ is used.**
1. file allocation table 2. directory
3. sequential access 4. direct access
5. None of these
- 185. To make a notebook act as a desktop model, the notebook can be connected to a ____ which is connected to a monitor and other devices.**
1. bay 2. docking station
3. port 4. network
5. None of these
- 186. You can use the tab key to**
1. move a cursor across the screen
2. indent a paragraph
3. move the cursor down the screen
4. Only 1 and 2
5. None of these
- 187. A collection of related files is called a**
1. character 2. field 3. database 4. record
5. None of these
- 188. Storage that retains its data after the power is turned off is referred to as**
1. volatile storage 2. non - volatile storage
3. sequential storage 4. direct storage
5. None of these
- 189. Which of the following is an example of connectivity?**
1. Internet 2. floppy disk
3. power cord 4. data
5. None of these
- 190. ____ is the process of finding errors in software code.**
1. Compiling 2. Testing 3. Running 4. Debugging
5. None of these
- 191. A ____ contains specific rules and words that express the logical steps of an algorithm.**
1. syntax 2. programming structure
3. programming language 4. logic chart
5. None of these
- 192. Changing an existing document is called ____ the document.**
1. creating 2. editing 3. modifying 4. adjusting
5. None of these
- 193. Virtual memory is**
1. memory on the hard disk that the CPU uses as an extended RAM
2. in RAM
3. only necessary if you do not have any RAM in your computer
4. a back up device for floppy disks
5. None of these
- 194. Computers use the ____ number system to store data and perform calculations.**
1. decimal 2. hexadecimal
3. octal 4. binary
5. None of these
- 195. The ____ key will launch the start buttons.**
1. esc 2. shift 3. windows 4. shortcut
5. None of these
- 196. To move to the beginning of a line of text, press the ____ key.**
1. home 2. a 3. page up 4. enter
5. None of these
- 197. When sending an e-mail, the ____ line describes the contents of the message.**
1. to 2. subject 3. contents 4. CC
5. None of these

198. Which groupings do you work with when formatting text in Word?

1. Tables, paragraphs and indexes
2. Paragraphs, indexes and sections
3. Characters, sections and paragraphs
4. Indexes, characters and tables
5. None of these

199. Which of the following is the largest unit of storage?

1. GB
2. KB
3. MB
4. TB
5. None of these

200. The ____ tells the computer how to use its components.

1. utility
2. network
3. operating system
4. application program
5. None of these

KRISHNAVENI

SRI KRISHNA VENI BANKING COCHING CENTRE KEY SHEET -10

1) 5	2) 2	3) 5	4) 4	5) 5	6) 3	7) 4	8) 5	9) 2	10) 3
11) 4	12) 4	13) 1	14) 5	15) 1	16) 3	17) 4	18) 3	19) 4	20) 2
21) 5	22) 4	23) 3	24) 2	25) 2	26) 5	27) 3	28) 4	29) 5	30) 5
31) 1	32) 5	33) 5	34) 5	35) 1	36) 3	37) 4	38) 2	39) 3	40) 5
41) 3	42) 2	43) 4	44) 4	45) 1	46) 1	47) 2	48) 5	49) 1	50) 5
51) 1	52) 2	53) 4	54) 3	55) 5	56) 3	57) 2	58) 5	59) 4	60) 1
61) 3	62) 5	63) 1	64) 2	65) 4	66) 3	67) 1	68) 2	69) 4	70) 5
71) 5	72) 2	73) 3	74) 1	75) 4	76) 3	77) 5	78) 2	79) 1	80) 4
81) 5	82) 3	83) 5	84) 2	85) 5	86) 1	87) 4	88) 4	89) 1	90) 2
91) 1	92) 4	93) 2	94) 3	95) 4	96) 1	97) 5	98) 3	99) 2	100) 3
101) 5	102) 3	103) 4	104) 2	105) 1	106) 1	107) 2	108) 2	109) 3	110) 5
111) 1	112) 4	113) 2	114) 5	115) 4	116) 5	117) 3	118) 4	119) 1	120) 5
121) 3	122) 2	123) 1	124) 3	125) 5	126) 5	127) 2	128) 2	129) 4	130) 1
131) 5	132) 1	133) 3	134) 4	135) 2	136) 1	137) 3	138) 5	139) 3	140) 4
141) 5	142) 1	143) 3	144) 4	145) 1	146) 3	147) 2	148) 1	149) 4	150) 5
151) 1	152) 4	153) 2	154) 5	155) 5	156) 2	157) 5	158) 3	159) 3	160) 1
161) 4	162) 3	163) 4	164) 4	165) 3	166) 4	167) 5	168) 2	169) 3	170) 1
171) 4	172) 3	173) 3	174) 2	175) 5	176) 4	177) 5	178) 4	179) 5	180) 5
181) 4	182) 3	183) 2	184) 3	185) 2	186) 4	187) 4	188) 2	189) 1	190) 2
191) 1	192) 2	193) 1	194) 4	195) 3	196) 1	197) 2	198) 1	199) 1	200) 3