

SRI KRISHNAVENI BANKING COACHING CENTRE

YEMMIGANUR, Cell : 9885303408

Website : www.krishnaveni632.yolasite.com

Marks : 200

SBI/SBI Associates Banks Clerks

Time : 135 Min

MODEL PAPER - 6

GENERAL ENGLISH

Directions (Qs. 1 to 15): Read the following passage carefully and answer the questions given below it. Certain words/phrases have been printed in bold to help you locate them while answering some of the questions.

Once upon a time there lived a vicious king, Raja Shankara - short-tempered and temperamental. "God I am", he said to his image as he stood into the mirror everyday, many times a day. He was obsessed with himself. He loved no one but himself. He was blinded towards the injustice in his kingdom because he had little time for his subjects. He wasted most of his time in pouring milk and honey over himself.

Interruption in his possessed life was dealt with stern reprimanding and sometimes on petty issues he would behead his servants. Provoked by his evil advisor Twishar, he went on with his self-indulged life, unaware of the plot his very devoted advisor was planning. A plot to dethrone the king, rule the kingdom with his wicked ways only to harness wealth and the reputation of a king.

One morning the king was on his usual morning horseback rounds but returned to the palace with an intense look on his face. He locked himself inside his palatial room only to unlock it at sundown. Just as the doors cracked open and Raja Shankara emerged from it, his wife rushed to embrace him. She feared a damaging incident had occurred.

The king spoke seldom that day and awoke the next day to make a proclamation to his servants and subjects. The whole kingdom feared what was in store for them from their angry king. But to their surprise he said to all gathered, "From now on I will be a different king. A softer and a patient king."

True to his words from that day on the king had truly turned on a new leaf; he cleaned out the corruption and injustice in a tender manner with punishments aimed to renew the person from within.

One fine day his evil advisor gathered courage to ask the reason for his paradigm shift. And the king answered.

When I went on horseback that morning a month ago. I noticed a dog brutally chasing a cat. The cat managed to sneak into a hole only after the dog bit her leg, maiming her for life. No far, the dog barked at a farmer who picked up a sharp stone and hit it straight in the dog's eye. Bleeding profusely, the dog yelped in pain. As the farmer walked on, he slipped on the edge of the road and broke his head.

All this happened in a matter of minutes before me and then I realised that evil begets evil. I thought about it deeply and was ready to give up my worldly life for the betterment of my subjects. I wanted to give up evil in me as I did not want evil to encounter me.

Sniggering away the immoral advisor thought what a perfect time it was to dethrone the king, because the Raja had grown kind hearted and patient and would not endeavour a combat. Thinking how he would plan his attack, he stumbled over a step that took him hurling

down the remaining steps, bringing his stop with a crash. He howled in pain only to discover he had broken the bones in both his legs.

1. How can Raja Shankara be described before his transformation?

- A. He was unjust.
- B. He was preoccupied with himself.
- C. He was cruel.

- 1. Only (A)
- 2. Only (B)
- 3. Only (C)
- 4. Only (A) and (B)
- 5. All the three (A), (B) and (C)

2. What happened to Twishar in the end when he had thought of a plan to dethrone Raja Shankara?

- 1. He was beaten up by the king for having cheated him
- 2. He was very apologetic for his behaviour
- 3. He at last managed to be crowned the King after successfully implementing his plan
- 4. He fell down a flight of steps and broke both his legs
- 5. None of these

3. What proclamation did the Raja make to his subjects?

- 1. That he was giving up his throne for the betterment of the Kingdom
- 2. That his advisor would be the King from then on
- 3. That he would be a better King to them he had been all this while
- 4. That his subjects were not good enough to deserve better treatment than what was already being meted out to them
- 5. None of these

4. What did Raja Shankara's wife think about the Raja's peculiar behaviour that particular day?

- 1. She was afraid that something really bad had happened.
- 2. She was afraid that the Raja would beat her up because of his unusual mood
- 3. She thought that he was in his usual sour mood
- 4. She thought that the Raja had received threats to his life from his servants
- 5. None of these

5. What was the reason for Raja Shankara's change in behaviour?

- 1. His advisor's words had made him realize his mistake
- 2. He had felt bad for a poor family on his tour around his kingdom
- 3. His wife had betrayed him and hence he was upset
- 4. He had realized that doing good to people would bring good to him
- 5. None of these

6. What can possibly be the moral of the story?

- 1. Believe in yourself
- 2. Money is not everything in life

3. Don't trust people
4. Better late than never
5. As you sow so shall you reap
7. How did Raja Shankara treat all his servants if they interrupted him; before he changed into a good person ?
 1. He treated all his servants with respect
 2. He would scold them and sometimes cut their heads off over trivial issues
 3. He would dismiss them from their duties never to be reinstated
 4. He would rob them of all their possessions
 5. None of these
8. What plan did Twishar have with regard to the Raja ?
 1. He planned to take over the Raja's throne through devious means
 2. He was a loyal servant to the Raja and always had his best interests in mind
 3. He had plans to provoking the Raja into ruling the Kingdom in more wicked ways
 4. He planned to kill the Raja with the help of the Raja's servants
 5. None of these
9. Why did Twishar think that this was the best time to dethrone the Raja ?
 1. As the Raja was sick, ailing and was on his deathbed
 2. As he knew that the Raja had finally lost his mind
 3. As he knew that the Raja had become a soft-natured person and would not attempt to fight.
 4. As he was sure, that he would be able to convince the people of the kingdom that the Raja had become weak
 5. None of these

Directions (Qs. 11 to 13) : Choose the word/group of words which is most similar in meaning to the word/group of words printed in bold as used in the passage.

11. BEGETS

1. Produces 2. loses 3. expects 4. avoids
5. calls

12. STERN

1. hard 2. tall 3. easy 4. tight
5. severe

13. GATHERED

1. parted 2. assembled
3. dispersed 4. pooled
5. collated

Directions (Qs. 14 & 15) : Choose the word/group of words which is most opposite in meaning to the word/group of words printed in bold as used in the passage.

14. PETTY

1. tremendous 2. huge
3. vast 4. important
5. fugal

15. BRUTALLY

1. cruelly 2. partly 3. gently 4. rarely
5. harshly

Directions (Qs. 16 to 20) : Rearrange the following six sentences (A), (B), (C), (D), (E), and (F) in the proper sequence to form a meaningful paragraph; then answer the questions given below them.

- A. The contractor was sorry to see his good worker go and asked if he could build just one more house as a personal favour.

- B. It was an unfortunate way to end a dedicated career.
- C. He told his employer-contractor of his plans to leave the house building business to live a more leisurely life with his wife and enjoy his extended family.
- D. An elderly carpenter was ready to retire.
- E. He resorted to shoddy workmanship and used inferior materials.
- F. The carpenter said yes, but over time it was easy to see that his heart was not in his work.

16. Which of the following should be the THIRD sentence after rearrangement ?

1. A 2. B 3. C 4. D
5. E

17. Which of the following should be the FIRST sentence after rearrangement ?

1. A 2. B 3. C 4. D
5. E

18. Which of the following should be the LAST (SIXTH) sentence after rearrangement ?

1. A 2. B 3. D 4. E
5. F

19. Which of the following should be the SECOND sentence after rearrangement ?

1. A 2. B 3. C 4. D
5. E

20. Which of the following should be the FOURTH sentence after rearrangement ?

1. B 2. C 3. D 4. E
5. F

Directions (Qs. 21 to 25) : Which of the phrases (1), (2), (3) and (4) given below each sentence should replace the phrase printed in bold in the sentence to make it grammatically correct ? If the sentence is correct as it is given and 'No correction is required', mark (5) as the answer.

21. Her entry to the office party **was restrict** as an official enquiry had been constituted against her.
 1. was restricting 2. is restricted
 3. was restricted 4. is restricting
 5. No correction required
22. Rima was at **her wits' end** trying to figure out what to buy for her friend's birthday.
 1. at her witting end 2. at her wit ends
 3. to her wit's end 4. so wit's end
 5. No correction required
23. Pritesh **while away his time** in playing games on the computer instead of studying.
 1. whiled away his time 2. whiled against his time
 3. whiling away his time 4. while awayed his time
 5. No correction required
24. Mohan had **made up his mind** about going on the world tour all alone.
 1. made minds 2. make his mind
 3. make up his minding 4. made up his mind
 5. No correction required
25. She rushed to the station but could **find any trace** of her daughter there.
 1. not found trace 2. find no trace
 3. found not trace 4. finding no trace
 5. No correction required

Directions (Qs. 26 to 30) : In each question below, a sentence with four words printed in bold type is given. These are numbered as (1), (2), (3) and (4). One of these four words printed in bold may be either wrongly spelt or, inappropriate in the context of the sentence. Find out the word

which is wrongly spelt or inappropriate, if any. The number of that word is your answer. If all the words printed in bold are correctly spelt and also appropriate in the context of the sentence, mark (5) i.e. 'All correct' as your answer.

26. Discussion (1) is an exchange of knowledge (2) whereas argument (3) is a depiction (4) of ignorance. All correct (5)
27. He was arrested (1) for the crime (2) and was charged (3) with attempt (4) to murder. All correct (5)
28. Commit (1) yourself to lifelong learning (2) as the most valuable (3) asset (4) you will have is your mind. All correct (5)
29. Believe (1) that life is worth (2) living and your belief will create (3) the fact (4). All correct (5)
30. The best educated (1) human being (2) is the one who understands (3) most about the life in which (4) he is placed. All correct (5)

Directions (Qs. 31 to 40): In the following passage there are blanks, each of which has been numbered. These numbers are printed below the passage and against each, five words are suggested, one of which fits the blank appropriately. Find out the appropriate word in each case.

Once upon a time, two friends were ... (31) ... through the desert. During some point of the ... (32) ... they had an argument, and one friend slapped the other one in the face. The one who got slapped was ... (33) ... but without saying anything, he wrote in the sand, "Today my best friend slapped me in the face." They kept on walking ... (34) ... they found an oasis, where they ... (35) ... to take a bath. The one, who had been slapped, got ... (36) ... in the quicksand and started drowning, but the friend saved him. After the friend ... (37) ... from the near drowning, he wrote on a stone, "Today my best friend saved my life." The friend who had slapped and saved his best friend asked him, "After I hurt you, you wrote in the sand and ... (38) ... you write on a stone, why?" The other friend ... (39) ..., "When someone hurts us, we should write it down in sand where winds of forgiveness can erase it away. But, when someone does something good for us, we must ... (40) ... it in stone where no wind can ever erase it".

31. 1. crawling 2. speaking 3. swimming 4. walking
5. dancing
32. 1. journey 2. sand 3. running 4. border
5. hunt
33. 1. dead 2. captured
3. presentable 4. missing
5. hurt
34. 1. as 2. until 3. from 4. with
5. through
35. 1. decided 2. fell 3. made 4. want
5. left
36. 1. home 2. stuck 3. blended 4. mixed
5. sitting
37. 1. separated 2. leaked 3. died 4. recovered
5. saved
38. 1. so 2. how 3. when 4. tomorrow
5. now
39. 1. called 2. tell 3. replied 4. questioned
5. asked
40. 1. talk 2. push 3. engrave 4. add
5. bury

QUANTITATIVE APTITUDE

Directions (Qs. 41 to 55): What will come in place of question mark (?) in the following questions?

41. $\frac{5}{11}$ of $\frac{4}{5}$ of $\frac{11}{16}$ of 848 = ?

1. 216 2. 222 3. 208 4. 212

5. None of these

42. 1.4% of 750 + 2.2% of 480 = ?

1. 21.06 2. 21.16 3. 20.88 4. 21.18

5. None of these

43. $\frac{3}{4}$ of 116 - $\frac{2}{3}$ of 87 = ?

1. 31 2. 27 3. 29 4. 26

5. None of these

44. $6.96 + 1.2 - 18.24 + 7.6 = ?$

1. 3.4 2. 3.14 3. 3.04 4. 3.24

5. None of these

45. $32.25 \times 2.4 \times 1.6 = ?$

1. 128.84 2. 123.84 3. 113.88 4. 112.84

5. None of these

46. 136% of 250 + 7% of 550 = 670

1. 64 2. 55 3. 56 4. 65

5. None of these

47. $448 - 16 \times 35 = ?$

1. 850 2. 890 3. 950 4. 980

5. None of these

48. $\frac{14 \times 25 - 5^2}{24 \times 5 + 8 \times 9} = ?$

1. $1\frac{9}{64}$ 2. $\frac{64}{75}$ 3. $1\frac{11}{64}$ 4. $1\frac{11}{75}$

5. None of these

49. $78.45 + 128.85 + 1122.25 = ?$

1. 1329.55 2. 1239.55 3. 1329.45 4. 1239.45

5. None of these

50. $8729 - 4376 + 1245 = ? + 2785$

1. 2713 2. 2823 3. 2833 4. 2733

5. None of these

51. $17\frac{2}{5} \times 4\frac{5}{8} - ? = 46\frac{7}{8}$

1. $32\frac{3}{5}$ 2. $33\frac{3}{5}$ 3. $33\frac{2}{5}$ 4. $32\frac{2}{5}$

5. None of these

52. $5616 \div 18 \div 8 = ?$

1. 36 2. 76 3. 49 4. 39

5. None of these

53. $420 \div 28 \times 288 \div 32 = ?$

1. 235 2. 236 3. 138 4. 132

5. None of these

54. $22^2 + \sqrt{?} = 516$

1. 1028 2. 1024 3. 1124 4. 1128

5. None of these

55. 45% of 660 + 28% of 450 = ?

1. 413 2. 428 3. 423 4. 418

5. None of these

Directions (Qs. 56 to 60): What will come in place of question mark (?) in the following number series?

56. 12 16 24 40 ?

1. 76 2. 72 3. 84 4. 88

5. None of these

57. 9 19 39 79 ?

1. 139 2. 129 3. 159 4. 149

5. None of these

58. 8 17 42 91 ?

1. 170 2. 142 3. 140 4. 172

5. None of these

59. 7 8 18 57 ?
1. 244 2. 174 3. 186 4. 226
5. None of these
60. 3840 960 240 60 ?
1. 20 2. 18 3. 12 4. 22
5. None of these
61. 75% of a number is equal to three-seventh of another number. What is the ratio between the first number and the second number respectively?
1. 4 : 7 2. 7 : 4 3. 12 : 7 4. 7 : 12
5. None of these
62. A 275 metre long train crosses a platform of equal length in 33 seconds. What is the speed of the train in kmph?
1. 66 2. 60
3. 64 4. 72
5. None of these
63. What is compound interest accrued on an amount of Rs. 45,000 in two years @ 9 p.c.p.a.?
1. Rs. 8,600 2. Rs. 8,565.40
3. Rs. 8,464.50 4. Rs. 8,540
5. None of these
64. Cost of 18 shirts and 45 trousers is Rs. 68,400. What is the cost of 10 shirts and 25 trousers?
1. Rs. 38,000 2. Rs. 36,000
3. Rs. 34,200 4. Rs. 36,200
5. None of these
65. If the fractions $\frac{9}{11}$, $\frac{7}{9}$, $\frac{5}{6}$, $\frac{4}{5}$ and $\frac{11}{13}$ are arranged in ascending order, which one will be fourth?
1. $\frac{9}{11}$ 2. $\frac{7}{9}$ 3. $\frac{5}{6}$ 4. $\frac{4}{5}$
5. $\frac{11}{13}$
66. Simple interest accrued on an amount in 8 years @ 12 p.c.p.a. is Rs. 5,520. What is the principal amount?
1. Rs. 5,750 2. Rs. 8,500 3. Rs. 5,650 4. Rs. 8,250
5. None of these
67. Find the average of the following set of numbers: 148, 88, 184, 166, 96, 122
1. 146 2. 142 3. 136 4. 132
5. None of these
68. Shrikant and Vividh started a business investing amounts of Rs. 1,85,000 and Rs. 2,25,000 respectively. If Vividh's share in the profit earned by them is Rs. 9,000, what is the total profit earned by them together?
1. Rs. 17,400 2. Rs. 16,400
3. Rs. 16,800 4. Rs. 17,800
5. None of these
69. Present ages of father and the son are in the ratio of 6 : 1 respectively. Four years hence the ratio of their ages will become 4 : 1 respectively. What is the son's present age?
1. 10 years 2. 6 years 3. 4 years 4. 8 years
5. None of these
70. A DVD player was purchased for Rs. 4,860. At what price should it be sold so that 25% profit is earned?
1. Rs. 6,225 2. Rs. 6,275 3. Rs. 6,075 4. Rs. 6,025
5. None of these
71. 65% of a number is more than its two-fifth by 140. What is 30% of that number?
1. 186 2. 168 3. 164 4. 182
5. None of these

72. Number obtained by interchanging the digits of two digit number is more than the original number by 27 and the sum of the digits is 13. What is the original number?

1. 58 2. 67 3. 76 4. 85
5. None of these

73. 22 men can complete a job in 16 days. In how many days will 32 men complete that job?

1. 14 2. 12 3. 16 4. 9
5. None of these

74. Mr. Davar spends 38% of his monthly income on food, 25% on children's education and 12% on transport and the remaining amount of Rs. 5,800 he saves. What is Mr. Davar's monthly income?

1. Rs. 23,200 2. Rs. 24,200
3. Rs. 23,800 4. Rs. 24,400
5. None of these

75. A, B, C, D and E are five consecutive odd numbers. Average of A and C is 59. What is the smallest number?

1. 65 2. 63 3. 61 4. 57
5. None of these

Directions (Qs. 76 to 80): Study the following table carefully to answer these questions.

Number of students appeared in SSC examination from five schools over the years

School Year	A	B	C	D	E
2004	650	760	820	800	780
2005	700	740	860	780	740
2006	800	820	940	750	730
2007	750	880	920	840	790
2008	850	840	900	860	770

76. Number of students appeared from school E in 2004 is approximately what percent of the total number of students appeared from all the schools together in that year?

1. 12 2. 28 3. 15 4. 30
5. 20

77. What is the average number of students appeared from school B for all the years?

1. 828 2. 808 3. 804 4. 812
5. None of these

78. Number of students appeared in 2006 from school A is what percent of the total number of students appeared from school A for all the years together?

1. $23\frac{2}{3}$ 2. $22\frac{1}{3}$ 3. $22\frac{2}{3}$ 4. $21\frac{1}{3}$

5. None of these

79. What is the ratio between the total number of students appeared in 2004 and 2005 together from schools C and D respectively?

1. 84 : 79 2. 79 : 84 3. 48 : 79 4. 79 : 48
5. None of these

80. What is the average number of students appeared from all the schools in 2007?

1. 842 2. 856 3. 836 4. 830
5. None of these

REASONING ABILITY

81. In a certain code language 'tree is very beautiful' is written as 'ka na da ta' and 'this is strong tree' is written as 'na pa sa ka'. How is 'beautiful' written in that code language?

1. da 2. ta
3. sa 4. Data inadequate
5. None of these

82. In a certain code GIVE is written as '51 @ ©' and FALL is written as '%219'. How is LEAF written in that code ?

1. 5©2% 2. 9©2% 3. 9@2% 4. 9©1%
5. None of these

83. How many such pairs of letters are there in the word COMPUTERS each of which has as many letters between them in the word as in the English alphabet ?

1. None 2. One 3. Two 4. Three
5. More than three

84. The positions of the first and the sixth digits in the number 5109238674 are interchanged. Similarly the positions of the second and the seventh digits are interchanged and so on. Which of the following will be the third digit from the right end after the rearrangement ?

1. 9 2. 0 3. 6 4. 3
5. None of these

85. Four of the following five are alike in a certain way and so form a group. Which is the one that does not belong to that group ?

1. Wheel 2. Tyre 3. Car 4. Door
5. Gear

86. Four of the following five are alike in a certain way and so form a group. Which is the one that does not belong to that group ?

1. 115 2. 85 3. 95 4. 75
5. 155

87. How many meaningful English words can be made with the letters EMTA using each letter only once in each word ?

1. None 2. One 3. Two 4. Three
5. More than three

88. In a certain code SUBSTANCE is written as RATRUFDQB. How is TENTHOUSE written in that code ?

1. SMDSIFTVP 2. UOFUIDRTN
3. UOFUIFTVP 4. SMDSIDRTN
5. None of these

Directions (Qs. 89 to 91): Following questions are based on the five three digit numbers given below:

519 364 287 158 835

89. If the positions of the first and the third digits within each number are interchanged, which of the following will be the third digit of the second lowest number ?

1. 9 2. 4 3. 7 4. 8
5. 5

90. If the positions of the first and the third digits within each number are interchanged, which of the following will be the middle digit of the second highest number ?

1. 1 2. 6 3. 8 4. 5
5. 3

91. Which of the following is the difference between the second digits of the highest and the lowest of these numbers ?

1. 3 2. 1 3. 2 4. 0
5. None of these

Directions (Qs. 92 to 97): Study the following information carefully and answer the questions given below:

A, M, P, D, Q, R, W and B are sitting around a circle facing at the center. D is fourth to the left of A who is third to the right of M. P is third to the left of Q who is third to the left of M. R is third of the right of W who is second to the right of B.

92. Who is second to the left of D ?

1. W 2. B
3. Q 4. Data inadequate
5. None of these

93. Who is third to the left of P ?

1. M 2. D
3. R 4. Data inadequate
5. None of these

94. Who is immediate right of Q ?

1. W 2. D
3. B 4. Data inadequate
5. None of these

95. Which of the following pairs represents the first and second respectively to the right of W ?

1. DM 2. QB
3. MR 4. Data inadequate
5. None of these

96. In which of the following pairs is the second person sitting to the immediate right of the first person ?

1. MD 2. RM 3. AB 4. QB
5. None of these

97. Who is fourth to the right of R ?

1. P 2. A
3. B 4. Data inadequate
5. None of these

Directions (Qs. 98 to 103): In the following questions, the symbols @, \$, *, © and # are used with the following meaning as illustrated below:

'P * Q' means 'P is neither greater than nor smaller than Q'.

'P \$ Q' means 'P is neither greater than nor equal to Q'.

'P @ Q' means 'P is not smaller than Q'.

'P © Q' means 'P is not greater than Q'.

'P # Q' means 'P is neither smaller than nor equal to Q'.

Now in each of the following questions assuming the given statements to be true, find which of the three conclusions I, II and III given below them is/are definitely true and give your answer accordingly:

98. **Statements:**

W @ T, T © M, M \$ D

Conclusions:

- I. W # D
II. W @ M
III. D # T
1. Only I is true 2. Only II is true
3. Only III is true 4. Only II and III are true
5. None of these

99. **Statements:**

F * R, R © M, M \$ D

Conclusions:

- I. D # R
II. D # F
III. M @ F
1. Only I and II are true 2. Only I and III are true
3. Only II and III are true 4. All I, II and III are true
5. None of these

100. **Statements:**

V © M, M * B, B \$ F

Conclusions:

- I. F # M
II. B @ V
III. F # V
1. Only I and II are true 2. Only II and III are true
3. Only I and III are true 4. All I, II and III are true
5. None of these

101. Statements:

D # N, N @ B, B * F

Conclusions:

I. F # D

II. N # F

III. N * F

1. Only I is true
2. Only II is true
3. Only III is true
4. Only either II or III is true
5. Only I and either II or III are true

102. Statements:

R \$ T, T # K, K @ M

Conclusions:

I. R \$ M

II. T # M

III. R \$ K

1. None is true
2. Only I is true
3. Only II is true
4. Only III is true
5. Only II and III are true

103. Statements:

H # N, N \$ T, T @ B

Conclusions:

I. B \$ M

II. H # T

III. B \$ H

1. None is true
2. Only I is true
3. Only II is true
4. Only III is true
5. Only II and III are true

Directions (Qs. 104 to 109): Study the following arrangement carefully and answer the questions given below:

W 3 # R @ E J K T 4 B 9 I * D U 8 1 H % A V 5 8 7
M P 2 Q \$ 6

104. Which of the following is the sixth to the right of the twenty-first from the right end of the above arrangement?

1. 8
2. D
3. P
4. @
5. None of these

105. How many such vowels are there in the above arrangement, each of which is immediately preceded by a symbol and immediately followed by a consonant?

1. None
2. One
3. Two
4. Three
5. Four

106. How many such symbols are there in the above arrangement, each of which is immediately followed by a number but not immediately preceded by a number?

1. None
2. One
3. Two
4. Three
5. More than three

107. How many such consonants are there in the above arrangement, each of which is immediately preceded by a number and immediately followed by a symbol?

1. None
2. One
3. Two
4. Three
5. More than three

108. Four of the following five are alike in a certain way based on their positions in the above arrangement and so form a group. Which is the one that does not belong to that group?

1. 8 1 D
2. 8 7 5
3. P 2 7
4. E J R
5. T 4 J

109. If all the symbols in the above arrangement are dropped, which of the following will be the fourteenth from the left end?

1. I
2. H
3. D
4. 8
5. None of these

Directions (Qs. 110 to 115): In each of the questions below are given three statements followed by three conclusions numbered I, II & III. You have to take the given statements to be true even if they seem to be at variance from

commonly known facts. Read all the conclusions and then decide which of the given conclusions logically follows from the given statements disregarding commonly known facts.

110. Statements:

All petals are trees.

All trees are gardens.

All roads are gardens.

Conclusions:

I. Some roads are trees.

II. Some gardens are trees.

III. Some gardens are petals.

1. Only I and II follow
2. Only II and III follow
3. Only I and III follow
4. All I, II and III follow
5. None of these

111. Statements:

All keys are locks.

All lock is toy.

All bags are toys.

Conclusions:

I. No bag is key.

II. Some bags are keys.

III. Some toys are keys.

1. None of follows
2. Only I follow
3. Only II follow
4. Only III follow
5. Only I and II follow

112. Statements:

Some days are nights.

Some nights are months

Some months are years.

Conclusions:

I. Some years are nights.

II. Some months are days

III. No year is night

1. Only I follows
2. Only II follow
3. Only III follow
4. Only either I or III follows
5. None of these

113. Statements:

All cycles are types.

Some tyres are wheels.

All wheels are buses.

Conclusions:

I. Some buses are tyres.

II. Some wheels are tyres.

III. Some buses are cycles.

1. Only I and II follow
2. Only I and III follow
3. Only II and III follow
4. Only I, II and III follow
5. None of these

114. Statements:

Some dogs are cats.

Some cats are horses

All horses are tigers.

Conclusions:

I. Some tigers are cats.

II. Some horses are dogs.

III. Some tigers are dogs.

1. None follows
2. Only I follows
3. Only II follow
4. Only III follow
5. Only II and III follow

115. Statements:

All ropes are sticks.

Some sticks are hammers.

Some hammers are lakes.

Conclusions:

I. Some lakes are ropes.

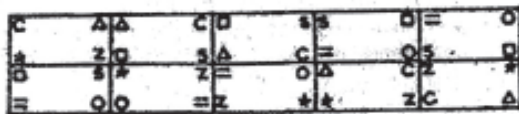
II. Some hammers are ropes.

III. Some lakes are sticks.

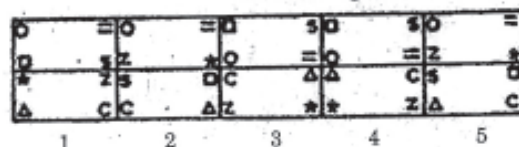
1. None follows
2. Only I follows
3. Only II follow
4. Only III follow
5. Only I and III follow

Directions (Qs. 116 to 120): In each of the questions given below which one of the five answer figures should come after the problem figures, if the sequence were continued?

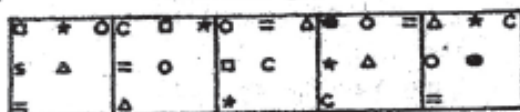
116. Problem Figures



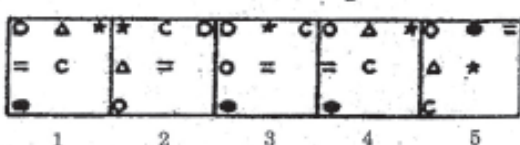
Answer Figures



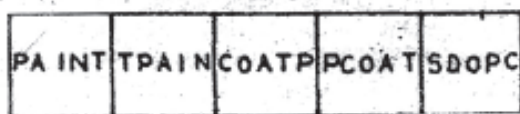
117. Problem Figures



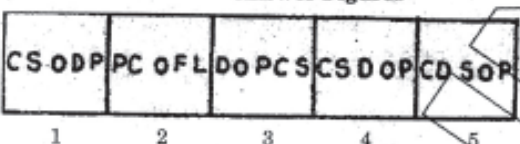
Answer Figures



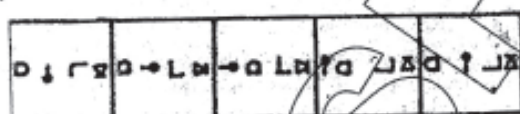
118. Problem Figures



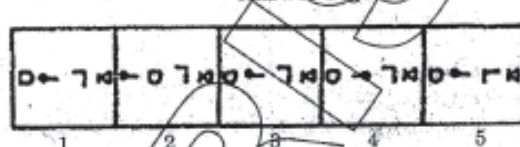
Answer Figures



119. Problem Figures



Answer Figures



120. Problem Figures



Answer Figures



MARKETING APTITUDE/ COMPUTER KNOWLEDGE

121. Passwords enable users to ____.

1. get into the system quickly
2. make efficient use of time
3. retain confidentiality of files
4. simplify file structures
5. None of these

122. When sending an e-mail, the ____ line describes the contents of the message.

1. subject
2. to
3. contents
4. cc
5. None of these

123. A (n) ____ is a program that makes the computer easier to use.

1. utility
2. application
3. operating system
4. network
5. None of these

124. The ____ tells the computer how to use its components.

1. utility
2. network
3. application program
4. operating system
5. None of these

125. Files deleted from the hard disk are sent to the

1. Recycle bin
2. floppy disk
3. clipboard
4. mother board
5. None of these

126. A ____ is a named set of characters that have the same characteristics.

1. type face
2. type style
3. font
4. pico
5. None of these

127. A ____ pre-designed document that already has coordinating fonts, a layout, and a background.

1. guide
2. model
3. ruler
4. template
5. None of these

128. Personal computers can be connected together to form a ____.

1. server
2. supercomputer
3. enterprise
4. network
5. None of these

129. Which elements of a Word document can be displayed in colour?

1. Only graphics
2. Only text
3. All elements
4. All elements, but only if you have a colour printer
5. None of these

130. A complete electronic circuit with transistors and other electronic components on a small silicon chip is called a(n) ____.

1. workstation
2. CPU
3. magnetic disk
4. integrated circuit
5. None of these

131. To access properties of an object, the mouse technique to use is ____.

1. right clicking
2. shift clicking
3. dragging
4. dropping
5. None of these

132. During the ____ portion of the Information Processing Cycle, the computer acquires data from some source.

1. storage and output
2. storage
3. input
4. output
5. None of these

133. The _____ of software contains lists of commands and options.
1. menu bar
 2. tool bar
 3. title bar
 4. formula bar
 5. None of these
134. A _____ can make it easier to play games.
1. mouse
 2. joystick
 3. keyboard
 4. pen
 5. None of these
135. How many different documents can you have open at any one time?
1. Not more than three
 2. Only one
 3. As many as your computer memory will hold
 4. No more than your Taskbar can display
 5. None of these
136. To make the number pad act as directional arrows, you press the _____ key.
1. shift
 2. arrow lock
 3. num lock
 4. caps lock
 5. None of these
137. Marketing can be effected by _____.
1. bringing in new customers
 2. retaining existing customers
 3. selling more to existing customers
 4. quality pre and post sales service
 5. All of these
138. Something which has easily understood instructions is to be _____.
1. user friendly
 2. information
 3. word processing
 4. icon
 5. None of these
139. Of the 4 P's of marketing, 3 are Product, Place and Promotion. Which is the 4th P?
1. Price
 2. Pricing
 3. Purpose
 4. Pride
 5. Pursuit
140. What is output?
1. What the processor takes from the user
 2. What the user gives to the processor
 3. What the processor gets from the user
 4. What the processor gives to the user
 5. None of these
141. Innovation in Marketing means _____.
1. good communication skills
 2. good negotiation skills
 3. spirited motivation
 4. novel methods of selling
 5. tired of marketing
142. Telemarketing involves _____.
1. good communication skills
 2. high level of motivation
 3. door-to-door campaigns
 4. event management
 5. All of these
143. Online Marketing is _____.
1. same as face-to-face marketing
 2. easier than traditional marketing
 3. boring, as customers are not visible
 4. voluminous task
 5. None of these
144. A Mission Statement is _____.
1. same, as a vision statement
 2. same as targets
 3. part of the marketing plan
 4. All of these
 5. None of these
145. A set of instructions telling the computer what to do is called _____.
1. mentor
 2. instructor
 3. compiler
 4. program
 5. None of these
146. Market Research is required for _____.
1. deciding sales volume
 2. deciding production levels
 3. deciding marketing strategies
 4. deciding sales team numbers
 5. All of these
147. Market segmentation means _____.
1. dividing the sales team into small groups
 2. dividing the marketing process into small steps
 3. dividing the territory into small areas
 4. dividing the target groups into homogeneous groups
 5. All of these
148. Market segmentation is required _____.
1. for avoiding cold calls
 2. to increase production
 3. for territory allocation
 4. for focussed marketing
 5. for increasing profits
149. Softcopy is the intangible output, so then what is hardcopy?
1. The physical parts of the computer
 2. The printed parts of the computer
 3. The printed output
 4. The physical output devices
 5. None of these
150. Motivation for salesperson can be achieved through _____.
1. high success rate of conversions
 2. better sales incentives
 3. continuous training and updation of knowledge
 4. support from operation staff
 5. All of these
151. Marketing of Education Loans can be done by _____.
1. approaching eligible students
 2. approaching the parents
 3. approaching colleges
 4. having tie-ups with Educational Institutes
 5. All of these
152. Diversification is useful for _____.
1. attaching more customers
 2. retaining existing customers
 3. increasing sales volume
 4. All of these
 5. None of these
153. Diversification means _____.
1. dividing the market into small segments
 2. dividing energy of the sales persons
 3. marketing of diverse products
 4. All of these
 5. None of these
154. One of the following is not a function of Retail Banking _____.
1. Accepting fixed deposits
 2. Giving Home loans
 3. Giving Education loans
 4. Joint ventures
 5. None of these
155. The target group for Fixed Deposits is _____.
1. all individuals
 2. all corporates
 3. NRI's
 4. Government bodies
 5. All of these

156. Data mining means ____.

1. same as database
2. same as data warehouse
3. market survey
4. analyzing the data on customers
5. None of these

157. Customer database is ____.

1. useful for lead generation
2. useful for cross selling
3. useful for CRM
4. useful for customisation of products
5. All of these

158. Data warehouse is ____.

1. a godown
2. a shop selling computers
3. a showroom
4. a system where data on customers is stored
5. None of these

159. Retail Banking means ____.

1. Retail shopkeepers
2. Banks financing to Retail Traders
3. Same as Universal Banking
4. Giving loans to corporates
5. Bank services to Individual customers

160. Education Loans can be more effectively canvassed by ____.

1. Door-to-door campaigns
2. E-mail contacts
3. Diversification
4. Tie-up with colleges
5. All of these

GENERAL AWARENESS

161) The Bharatiya Janata party emerged as the Largest party in the just concluded 16th Loksabha elections. How many seats did it win?

- 1) 272
- 2) 276
- 3) 280
- 4) 282
- 5) 284

162) Russi Mody passed away on May 16th, 2014 at the age of 96. he was the former chairman of ?

- 1) Tata Group
- 2) Tata Steel
- 3) Tata Motors
- 4) Tata consultancy services
- 5) None of these

163) Geo TV is facing a blasphemy case. It is a television channel based in?

- 1) Afghanistan
- 2) United Arab Emirates
- 3) Pakistan
- 4) Saudi Arabia
- 5) Qatar

164) Who was sworn in as the 23rd Chief Minister of Bihar on May 20, 2014 ?
(He succeeded Nitish Kumar)

- 1) Dulalchandra Goswami
- 2) Vinay Bihari
- 3) Ramai ram
- 4) Jitan Ram Manjhi
- 5) Damodar raut

165) Nabam Tuki was sworn in as the eighth Chief Minister of which of the following states for the second consecutive term on may 18, 2014?

- 1) Manipur
- 2) Meghalaya
- 3) Tripura
- 4) Sikkim
- 5) Arunachal Pradesh

166) Formula one great sir Jack Brabham died on may 19, 2014. He belonged to ?

- 1) England
- 2) Germany
- 3) Argentina
- 4) Australia
- 5) New Zealand

167) Which one of the following books is not written by Ramachandra Guha?

- 1) Patriots and partisans
- 2) Makers of Modern India
- 3) India After Gandhi
- 4) Gandhi before India
- 5) India since Independence

168) Which Indian company has tied up with Saudi Aramco and General Electric (GE) to set up the first all-women business process outsourcing (BPO) centre in Riyadh, Saudi Arabia ?

- 1) Wipro
- 2) Mindtree
- 3) Cognizant Technology solutions
- 4) Tata Consultancy services
- 5) Infosys

169) The Fifth Estate is a Hollywood film based on the life of ?

- 1) Edward Snowden
- 2) Malala Yousafzai
- 3) Julian Assange
- 4) Vladimir Putin
- 5) Mark Zuckerberg

170) Which of the following is a Development Financial institution (DFI) in India?

- 1) SBI
- 2) HSBC
- 3) HDFC BANK
- 4) IFCI
- 5) RBI

171) Which country has withdrawn from the commonwealth in October 2013?

- 1) Rwanda
- 2) Gambia
- 3) Mozambique
- 4) Senegal
- 5) Mauritius

172) India is a member of which of the following Organizations?

- 1) SCO
- 2) ASEAN
- 3) APEC
- 4) OPEC
- 5) None of these

173) Which country conferred its highest civilian honor the Chevalier de la Legion d'Honneur on activist Anjali Gopalan for her work on transgender and HIV-positive patients?

- 1) Spain
- 2) Portugal
- 3) France
- 4) Germany
- 5) Italy

174) The 2013 Anna Politkovskaya award was given to ?

- 1) Malali Joya
- 2) Halima Bashir
- 3) Aung San Sun Kyi
- 4) Malala Yousafzai
- 5) Eleanor Catton

175) What is India's rank on gender gap index for the year 2013?

- 1) 101
- 2) 102
- 3) 103
- 4) 104
- 5) 105

176) Which state topped in communal riots between January 2010 and March 2013?

- 1) Uttar Pradesh
- 2) Madhya Pradesh
- 3) Maharashtra
- 4) Karnataka
- 5) Andhra Pradesh

177) Which country has forty percent of the world's child brides ?

- 1) Ethiopia
- 2) South Sudan
- 3) Sierra Leone
- 4) Yemen
- 5) India

178) The 2013 edition of the NCC National Games were held in ?

- 1) Hyderabad
- 2) Pune
- 3) New Delhi
- 4) Mumbai
- 5) Kochi

- 179) Who is the oldest boxer to win a world title?
(He won the International Boxing Federation's light heavy weight title at 48 years)
1) Beibut Shumenov 2) Tavoris Cloud
3) Jean Pascal 4) Bernard Hopkins
5) Karo Murat
- 180) Velo d'Or award is given annually in which of the following sports?
1) Archery 2) Boxing 3) Cycling
4) Football 5) Golf
- 181) Tilaiya dam was constructed across the Barakar River in?
1) Bihar 2) Jharkhand 3) Chhattisgarh
4) Odisha 5) Uttar Pradesh
- 182) Which of the following is also known as consumer banking or personal banking?
1) Corporate banking 2) Business banking
3) Investment banking 4) Retail banking
5) Wholesale banking
- 183) The official change in the exchange rate of domestic currency is called?
1) Inflation 2) Deflation 3) Appreciation
4) Depreciation 5) Revaluation
- 184) Porcine Reproductive and Respiratory Syndrome (PRRS) is in the news recently. It is a Disease of?
1) Poultry 2) Pigs 3) Cattle 4) Dogs 5) Cats
- 185) Which one of the following banks was included in the second schedule to the Reserve bank of India Act, 1934 on May 21, 2014?
1) Axis bank 2) Yes bank 3) Indusind bank
4) Bharatiya Mahila bank 5) None of these
- 186) Anandiben Patel took charge as the first women Chief minister of which of the following states On May 22, 2014?
1) Maharashtra 2) Gujarat 3) Rajasthan
4) Goa 5) Chhattisgarh
- 187) The Reserve bank of India, for the benefit of the persons with disabilities, instructed that banks should make all new ATMs installed from which of the following dates as talking ATMs with Braille Keypads?
1) June 1, 2014 2) July 1, 2014 3) August 15, 2014
4) January 1, 2015 5) April 1, 2015
- 188) Former New York mayor Michael Bloomberg was honored with the first-ever Genesis prize On May 22, 2014. The \$1 million Genesis prize is given by which of the following countries?
1) USA 2) Germany 3) Israel 4) UK 5) Canada
- 189) Who took over as the new chief Information Commissioner (CIC) on May 22, 2014?
(He succeeded Sushma Singh)
1) Syed Asif Ibrahim 2) Vijai Sharma
3) Sharat Sabharwal 4) Basant Seth
5) Rajiv Mathur
- 190) SIMBEX-14 was started off the Andaman and Nicobar Islands on May 22, 2014. It is an annual joint naval exercise conducted by India and?
1) Saudi Arabia 2) Spain 3) Singapore
4) Sri Lanka 5) South Africa
- 191) Pakistan's teenage education activist Malala Yousafzai did not win which of the following prizes/ Awards in 2013?
1) Sakharov prize
2) Peter J. Gomes Humanitarian award
3) Clinton Global Citizen award
4) Anna Politkovskaya award
5) South-south award
- 192) G-4 countries are pushing for the inclusion of more countries in the United Nations Security Council (UNSC). Which one of the following countries is not a G-4 country?
1) Brazil 2) Germany 3) Japan
4) India 5) Italy
- 193) The Finance Commission submits its report to the?
1) Lok Sabha 2) Finance Minister 3) President
4) Prime Minister 5) Planning Commission
- 194) Who is/are the winners of the Clinton Global Citizens Awards for the year 2013?
1) Malala Yousafzai 2) Bunker Roy
3) Rafiq Kathwari 4) Both 1 and 2
5) All 1, 2 and 3
- 195) Which one of the following Rajiv Khel Ratna award winners is not a shooter?
1) Anjali Bhagwat 2) Anju Bobby George
3) Rajyavardhan Singh Rathore
4) Manavjit Singh Sandhu 5) Gagan Narang
- 196) The Karera Wildlife Sanctuary is situated in the Shivpuri district of?
1) Uttarakhand 2) Maharashtra 3) Gujarat
4) Uttar Pradesh 5) Madhya Pradesh
- 197) Which Indian social activist founded the Barefoot College in the village of Tilonia in Rajasthan in 1972?
1) Medha Patkar 2) Ramesh Agarwal
3) Sandeep Pandey 4) Bunker Roy
5) None of these
- 198) The P5+1 is a group of six world powers which joined the diplomatic efforts with Iran with regard to its nuclear program. Which country does 1 refer to in P5+1?
1) India 2) Brazil 3) Canada
4) South Africa 5) Germany
- 199) The Reserve Bank of India became a state-owned institution in?
1) 1934 2) 1935 3) 1949 4) 1950 5) 1947
- 200) According to the first Global Slavery Index published in October 2013, which country has the highest proportion of slaves in the world?
1) Mauritania 2) Haiti 3) Pakistan
4) India 5) Nepal

MODEL PAPER - 6

1) 5	2) 4	3) 3	4) 1	5) 4	6) 5	7) 2	8) 1	9) 3	10) 2	11) 1	12) 5	13) 2	14) 4	15) 3	16) 1
17) 4	18) 2	19) 3	20) 5	21) 3	22) 5	23) 1	24) 4	25) 2	26) 3	27) 3	28) 4	29) 1	30) 2	31) 4	32) 1
33) 5	34) 2	35) 1	36) 2	37) 5	38) 5	39) 3	40) 3	41) 4	42) 1	43) 3	44) 1	45) 2	46) 5	47) 4	48) 3
49) 3	50) 5	51) 2	52) 4	53) 5	54) 2	55) 3	56) 2	57) 3	58) 4	59) 5	60) 5	61) 1	62) 2	63) 3	64) 1
65) 3	66) 1	67) 5	68) 2	69) 2	70) 3	71) 2	72) 1	73) 5	74) 1	75) 4	76) 5	77) 2	78) 4	79) 1	80) 3
81) 4	82) 2	83) 5	84) 2	85) 3	86) 4	87) 5	88) 1	89) 4	90) 4	91) 3	92) 3	93) 2	94) 1	95) 1	96) 3
97) 5	98) 3	99) 4	100) 4	101) 5	102) 3	103) 1	104) 1	105) 3	106) 1	107) 3	108) 2	109) 4	110) 2	111) 2	112) 4
113) 1	114) 2	115) 1	116) 5	117) 1	118) 4	119) 3	120) 2	121) 3	122) 1	123) 3	124) 4	125) 1	126) 3	127) 4	128) 4
129) 3	130) 4	131) 1	132) 3	133) 1	134) 2	135) 3	136) 3	137) 4	138) 1	139) 1	140) 4	141) 4	142) 1	143) 5	144) 5
145) 4	146) 3	147) 4	148) 4	149) 3	150) 5	151) 5	152) 4	153) 3	154) 4	155) 5	156) 4	157) 5	158) 4	159) 5	160) 4
161) 4	162) 2	163) 3	164) 4	165) 5	166) 4	167) 5	168) 4	169) 3	170) 4	171) 2	172) 5	173) 4	174) 2	175) 3	176) 4
177) 1	178) 1	179) 5	180) 3	181) 4	182) 3	183) 2	184) 4	185) 5	186) 2	187) 4	188) 2	189) 2	190) 3	191) 5	192) 3
193) 5	194) 5	195) 3	196) 4	197) 2	198) 5	199) 4	200) 5								